



basic education

Department:
Basic Education
REPUBLIC OF SOUTH AFRICA

TIMARAKA

XIKAMBELO XA RIXAKA XA LEMBE NA LEMBE 2014 GIREDI 1 MATEMATIKI: XITSONGA XIKAMBELO

TIMARAKA: 20

NKARHI: AWARA 1

XIFUNDZANKULU _____

XIFUNDZANTSONGO _____

SEKETE _____

VITO RA XIKOLO _____

NOMBORO YA EMIS (9 wa tidigiti)

--	--	--	--	--	--	--	--	--

TLILASI (xik. 1A) _____

XIVONGO _____

VITO _____

RIMBEWU (✓)

MUFANA

NHWANYANA

SIKU RO VELEKIWA

C	C	Y	Y	M	M	D	D
---	---	---	---	---	---	---	---

Xikambelo lexi xi na tipheji ta 8 leti nga katsiki pheji leri.

Swiletelo swa mudyondzisi:

1. Hlayela vadyondzi xivutiso xin'wana na xin'wana hi ku nonoka hi rito ro twakala.
2. Hlaya xivutiso kambirhi loko vadyondzi va ri karhi va landzelela eka buku ya swivutiso.
3. Va nyike nkarhi wo tsala tinhlamulo hi voxwe eka swivandla leswi nyikiweke.
4. Matirhelo hinkwawo ya fanele ya kombisiwa eka phepha ra swivutiso ku nga ri eka phepha ra mpfampfarhuto.
5. Loko va hetile, va hlayeli xivutiso lexi landzelaka.
6. Landzelela maendlelo lawa ku fika eka xivutiso xo hetelela.
7. Ku tirhisa khalikhuletara a swi pfumeleriwi.
8. Xikambelo lexi xi na 20 wa timaraka.
9. Nkarhi lowu vekiweke wo hlamula swivutiso i 60 wa timinete.
10. Endla xitoloveto ku sungula na vadyondzi.

Xitoloveto

$8 - 5 = 3$. Nhlamulo hi ku tirhisa tinhlayo ta menthele


kumbe

Nhlamulo hi ku tirhisa swifaniso/tidayagiramu.



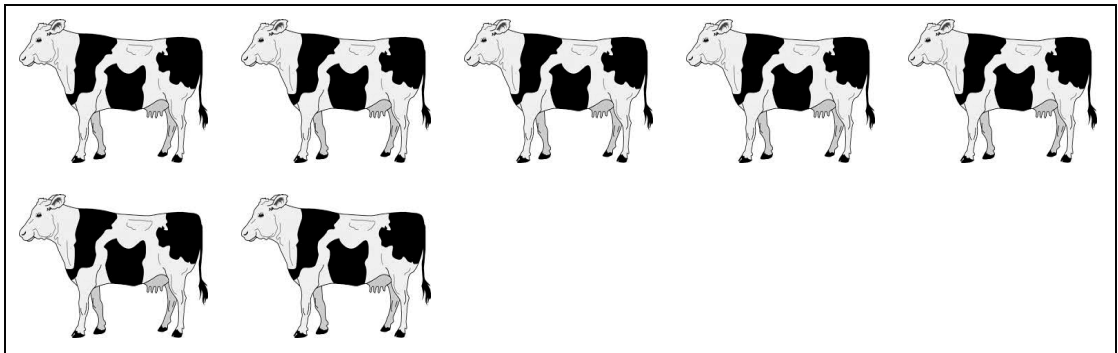
Xikambelo xi sungula eka pheji leri landzelaka.

1. Hlayela swifaniso swa timbilu.



Ku na swifaniso swa timbilu swa _____.

2. Langutisa swifaniso swa tihomu u hetisa 2.1 na 2.2.



2.1. Mfungho wa nomboro i_____.

2.2 Vito ra nomboro i_____.

3. Tsala tinomboro leti ku suka eka leyitsongo ku fika eka leyikulu.

13, 8, 3, 4, 11

_____, _____, _____, _____, _____

4. Hlamula 4.1 na 4.2.


4.1 Hafu ya $\frac{1}{4}$ = _____

4.2 Thantlha nomboro.

$15 = \text{_____} + \text{_____}$


5. Tinyiko u yile exikolweni a ri na 15 wa timhavulu. U yile ekaya a ri na 11 wa timhavulu. Xana u lahlekeriwile hi timhavulu tingani exikolweni?

6. Langutisa swifaniso leswi nga laha hansi. Xana ku na mavhilwa mangani eka swikanyakanya swa 6? Tsala xivulwa xa nomboro.




_____ = _____

7. Ava 12 wa makokisi ku ringana exikarhi ka vana va 3. Xana n'wana un'wana na un'wana u ta kuma makokisi mangani?



N'wana un'wana na un'wana u ta kuma _____ wa makokisi.

8. Bongji u xavile rhula hi R6,00. Xana u fanele ku vuyela hi cinci ya mali muni loko a hakela hi R10 ya phepha?



U ta kuma R _____ cinci.

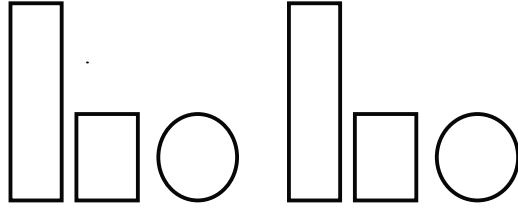
9. Nghenisa nhlamulo.

$$8 + 3 = \square$$



10. Hlamula swivutiso 10.1 na 10.2.

10.1 Vuyelela patironi kan'we.




10.2 Hetisa patironi ya tinomboro.


20	19	18				15
----	----	----	--	--	--	----

11. Hlamula 11.1 na 11.2.

11.1 Dirowa (x) eka xivumbeko lexi nga na matlhelo yo olokathwixi.



11.2 Dirowa ntila wa ndzinganiso (simenteri).

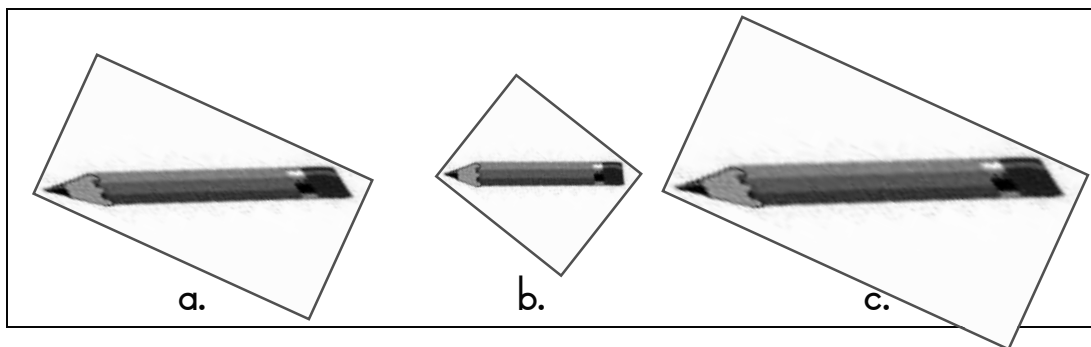


12. Nghenisa siku ra vhiki leri kayivelaka.

Ravumbirhi, Mugqivela, Ravumune, Sonto, Ravuntlhanu,
Musumbhunuko, Ravunharhu

Musumbhunuko
Ravumbirhi
Ravunharhu
Ravumune
Mugqivela
Sonto

13. Dirowa (x) eka penisele leyi nga koma ngopfu.



14. Languta girafu ya swif aniso kutani u hlamula xivutiso lexi landzelaka.

Mali leji hlengeleteweke ku teka riendzo ro ya eZoo	
Jamela	
Lulama	
Magezi	
Nsovo	

Xana i mani a hlengeleteke mali yo tala? _____

NTSENGO: 20

