



basic education

Department:
Basic Education
REPUBLIC OF SOUTH AFRICA

EMAMAKI

LUHLOLO LWAVELONKHE LWEMNYAKA 2013 LIBANGA 1 TIBALO - SISWATI SIVIVINYO

EMAMAKI: 20

SIKHATSI: 1 LI - AWA

IPHROVINSI _____

IDISTRKTHI _____

SIYINGI _____

LIGAMA LESIKOLO _____

INOMBOLO YE-EMISI (emadijithi layi-9)

--	--	--	--	--	--	--	--	--

LIBANGA (Sib. 1A) _____

SIBONGO _____

LIGAMA _____

BULILI (✓)

UMFANA

INTFOMBATANE

LUSUKU LWEKUTALWA

C	C	Y	Y	M	M	D	D
---	---	---	---	---	---	---	---

Lesivivinyo sinemakhasi la- 6, ngaphandle kwelikhasi langaphandle.

Ticondziso tathishela:

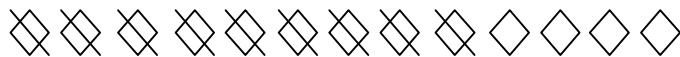
1. Fundzela bafundzi umbuto ngalokuvakalako ungasheshisi.
2. Fundza umbuto kabili, ngalesikhatsi bafundzi balandzela emaphepheni abo.
3. Banike sikhatsi setikubhalela ngekwabo timphendvulo etikhaleni letinikiwe.
4. Uma seabacedzile, chubeka ufundze umbuto lolandzelako
5. Landzela leyo ndlela ute ufike embutweni wekugcina.
6. Ungakuvumeli kusetj esentiswa kwemishini yekubala.
7. Sivivinyo sinemamaki lange- 20.
8. Sikhatsi sekubhala sivivinyo ngemaminithi lange- 60.
9. Yenta umsebenti wekutilongga nebafundzi.

Umsebenti wekutilongga:

$13 - 9 = 4$ ngekusebentisa tibalo tenhloko

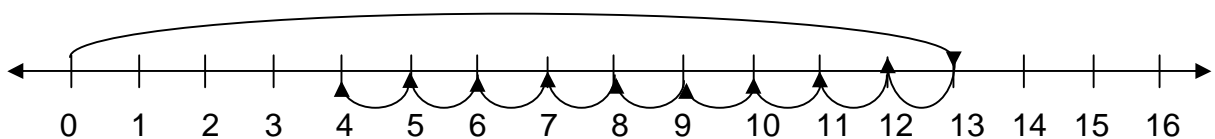
nobe

I mphendvulo: ngekusebentisa titfombe



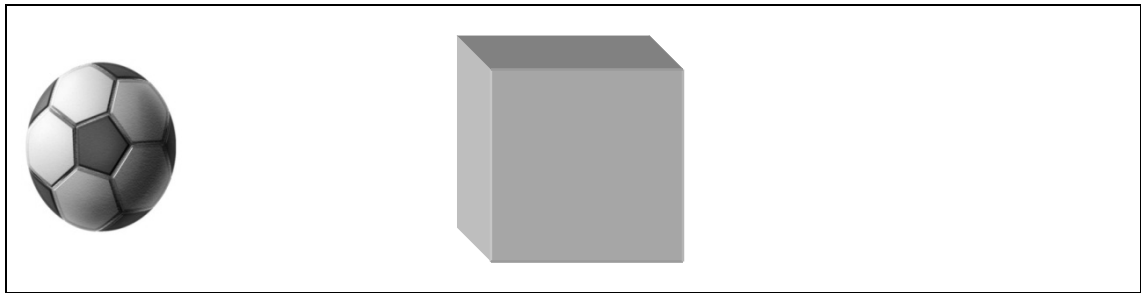
nobe

I mphendvulo: ngekusebentisa umugcatinombolo.

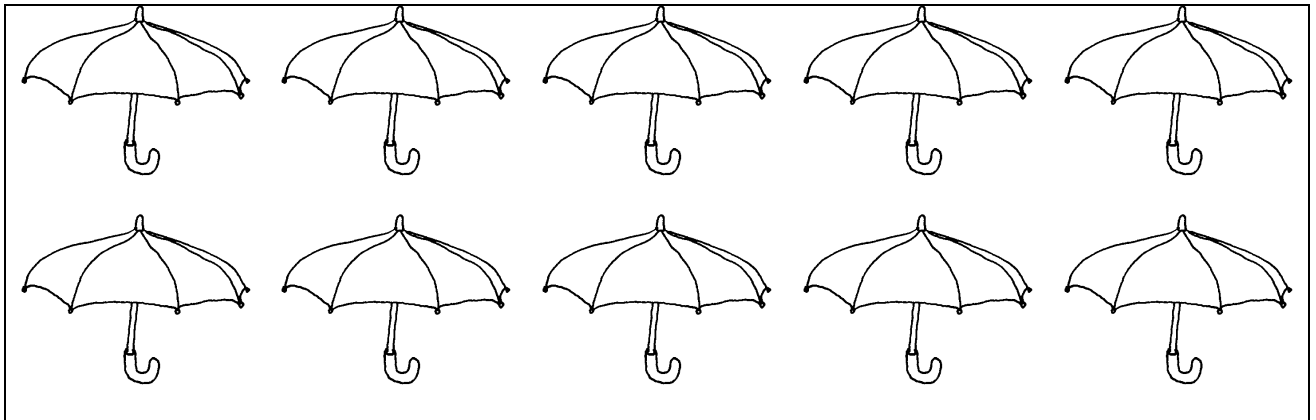


Sivivinyo sicala ekhasini lelilandzelako

1. Dvweba siphambano (x) entfweni lengashelela.



2. Bala linani letambulelo letisesitfombeni bese ubhala kutsi tingaki kanye nenombolo yato ngemagama.



2.1 Linani lato ti- _____

2.2. Inombolo yato ngemagama

3. Faka tinombolo letisele:

20	30			60		80
----	----	--	--	----	--	----

4. Faka imphendvulo:

$12 - 3 = \square$

5. Dvweba bobunj wa labatsatfu labalandzelako kute ucedzele



6. Cedzela iphethini yetinombolo:

2; 12; _____; 32; 42; 52

7. Mangaki emavili emabhayisikili la- 7?

A large empty rectangular box provided for the student to write their answer to question 7.

8. Bhala tinombolo letilandzelako ucale ngalencane uyogcina ngalengkulu kakhulu.


12 9 3 7 15

9. Leti tinyanga temnyaka:

Bhimbidwane, Indlovana, Indlovulenkulu, Mabasa,
Inkhwekhweti, Inhlaba, Kholwane, Ingci, Inyoni, Imphala,
Lweti, Ingongoni.

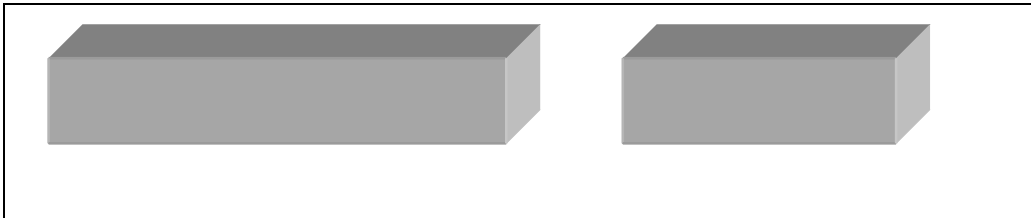
Nguyiphi inyanga yesitsatfu leta emva kweNkhwekhweti?

10. Yabela bangani laba-3 emakhekhe la- 9 ngekulingana.

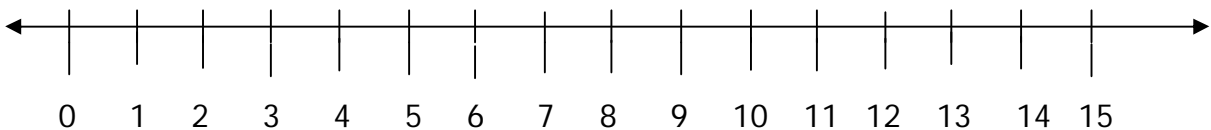


Munye umngani ut fola emakhekhe la- _____

11. Dvweba siphambano "X" ent fweni lendze.



12. Sebentisa umugcatinombolo ukhombise kutsi utawubala nj ani
 $4 + 2 + 2$.




13. Ihhafu ye- 12 = _____

14. Dvweba titfombe kute usombulule sibalo sendzaba.

Lerato unemaswidi la- 11, John unemaswidi la- 5. Mancane ngalamangaki emaswidi aJohn kunalawo aLerato?

Emaswidi aJohn mancane nge- _____ kunalawo aLerato.

15. Eva utsenga ibhola nge- R5,00 nemahhabhula la- 2 labita R2,00 ngalinye. Ubhadala nge- R10,00 lahlangene.




15.1 Ngumalini latsenge ngayo seyiyonkhe?

R_____

15.2 Ngumalini intjintji yakhe latayitfola?











R_____

16. Dvweba umugca lowehlukanisa emkhatsini kulingane ngalokufanako.



17. Buka igrafu lengentasi bese uphendvula umbuto.

Timoto letibutfwe bafundzi labane beLibanga 1.

Linani letimoto	5				
	4				
	3				
	2				
	1				
	Jack	Thandi	Peter	Nora	

Thandi ubutse timoto letinyenti ngaletingaki kuneta Peter?

Samba: 20