



basic education

Department:
Basic Education
REPUBLIC OF SOUTH AFRICA



UKUHLOLWA KWELIZWELOKE KOMNYAKA NOMNYAKA 2015 IGREYIDI 1 IIMBALO: ISINDEBELE UKUHLOLWA

AMAMAKSI: 20

AMAMAKSI

ISIKHATHI: I-IRI LI-1

IPHROVINSI _____

IDISTRIKTHI _____

ISIYINGI _____

ISIKOLO _____

INOMBORO YE-EMIS (amadijithi ali-9)

--	--	--	--	--	--	--	--	--

ITLASI (isib.1A) _____

ISIBONGO _____

IGAMA _____

UBULILI (✓)

UMSANA

UMNTAZANA

ILANGA LAMABELETHO


C	C	Y	Y	M	M	D	D
---	---	---	---	---	---	---	---


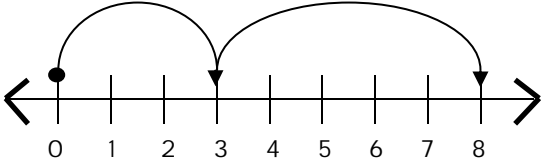
Ukuhlolwa lokhu kunamakhasi ali-9 ngaphandle kwephepha lekhavara.

Iinlayelo zakatitj here:

1. Fundela abafundi umbuzo/ilayelo ngalinye buthaka begodu uzwakale.
2. Funda imibuzo/iinlayelo kabili, abafundi bona bakulandele eencwadini zabo.
3. Ungahlathululi imibuzo/iinlayelo.
4. Banikele isikhathi sokutlola iimpendulo ngokuzij amela, eenkhaleni neemfremini ezinikelweko. Ungadoseli abafundi eempendulweni.
5. Lokha abafundi nasele baqedile ngombuzo/ngelayelo ragela phambili ngokufunda umbuzo/ilayelo elilandelako.
6. Landela ikambiso efanako ukufika embuzweni wokugcina.
7. Yoke imisebenzi kufanele itj engiswe ephepheni lokutlolela, eemfremini begodu ingasi ephepheni lokulahlwa.
8. Ungavumeli ukusetj enziswa kwekhalikhuleyitha.
9. Yenza imisebenzi yokuzij ayeza nabafundi.


I misebenzi yokuzij ayeza:

<p>1. Balisisa:</p> $8 - 5 = \square$	<p>Uphendule kuhle umbuzo nangabe ipendulo yakho ngu-3.</p> 
---------------------------------------	--


<p>2. Tj engisa imeqo enambalayinini ya-</p> $3 + 5 = 8.$ 	<p>Uphendule kuhle umbuzo nangabe ugwale imeqo ya fika ku-8 ngendlela ekungiyi.</p> 
--	---

Ukuhlolwa kuthoma ekhasini elilandelako.

1. Qedelela iphet hini.



2. Bala amaqatj hazi.



2.1 Tlola itshwayo lenomboro. _____

2.2 Tlola igama lenomboro. _____

3. Buyelela utlole iinomboro lezi ukusuka kencani khulu ukuya kekulu khulu.

14	6	3	4	13
----	---	---	---	----

4. Buyelela u-8 kabili. _____

5. Phula inomboro:

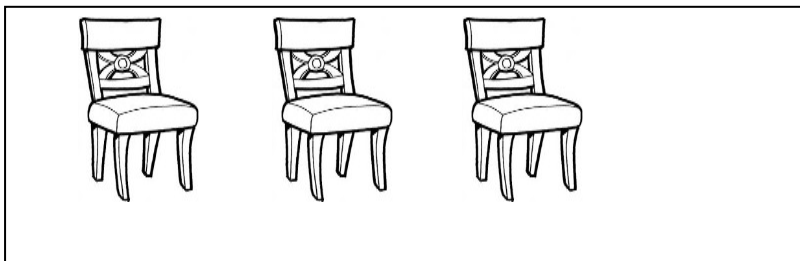
$$12 = \underline{\hspace{2cm}} + \underline{\hspace{2cm}}$$

6. UBadanile unamaswidi abu-8. Uthenga amanye ama-5 ngaphezulu.
Mangaki amaswidi anawo sekawoke?



UBadanile unamaswidi a sekawoke.


7. Bala iinyawo zesitulo ngasinye.



Tlola umutj ho weenomboro.




$$\underline{\hspace{2cm}} + \underline{\hspace{2cm}} + \underline{\hspace{2cm}} = \underline{\hspace{2cm}}$$

8. USizani unamakhrayoni ali-12. Uwapaka ngokulinganako emabhoksini ama-4. Mangaki amakhrayoni azokuba ngebhoksini ngalinye?



I bhoksi ngalinye linamakhrayoni a_____.

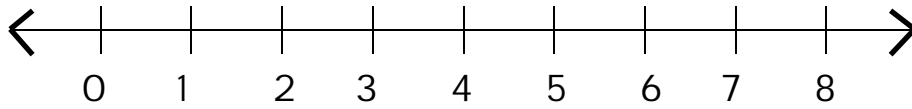
9. Qala iinthombe neentengo zazo ngenzasi:

pencil		R2
ruler		R1
book		R5

Ipensela, irula nencwadi sezizoke zizokubiza malini?

Sezizoke zizokubiza ama-R_____.

10. Gwala imeqo enambalayinini utj engise bonyana $4 + 3 = 7$.




11. Balisisa:

$$10 - 4 = \square$$

12. Qedelela iphethini yeenomboro.


5	10	15				35
---	----	----	--	--	--	----

13. Thala umuda umadanise ij amo negama ekungilo.



uncantathu
indulungu
uncamane

14. Thala umuda wesimethri ej ameni elingenzasi.











15. Zingaki iinyanga zomnyaka?

Iinyanga zomnyaka zi _____.

16. Gwala indulungu emntazaneni omfitj hani khulu.



17. Funda igrafu bese uphendula imibuzo engenzasi.

		Iimfuyosithandwa zabafundi		
		Inani labafundi	4	
3				
2				
1				
	ukatsu		inja	inyoni

Banengi ngabangaki abafundi abanabokatsu kunalabo abaneenyoni?

INANI: 20

