



basic education

Department:
Basic Education
REPUBLIC OF SOUTH AFRICA

AMAMA KSI

UKUHLOLWA KWELIZWELOKE KOMNYAKA NOMNYAKA 2014 IGREYIDI 1 IIMBALO: ISINDEBELE ISIHLAHLUBO

AMAMA KSI: 20

ISIKHATHI: LI-IRI LI-1

IPHROVINSI _____

ISIYINGI _____

IDISTRIKTHI _____

IGAMA LESIKOLO _____

INOMBORO YE- EMIS (amadijithi ali-9)

--	--	--	--	--	--	--	--	--

ITLASI (Isib.1A) _____

ISIBONGO _____

IGAMA _____

UBULILI (✓)

UMSANA

UMNTAZANA

ILANGA LAMABELETHO

C	C	Y	Y	M	M	D	D
---	---	---	---	---	---	---	---

Isihlahlubo lesi sinamakhasi abu-8 ngaphandle kwephepha lekhavara.

Iinlayelo zakati jhere:

1. Fundela abafundi umbuzo ngamunye buthaka begodu kuzwakale.
2. Funda umbuzo ngamunye kabili, abafundi bona bakulandele ngokuqala eencwa janeni zabo.
3. Banikele isikhathi sokutlola iimpendulo ngokwabo, eenkhaleni ezinikelweko.
4. Koke ukubala kufanele kusetjenzelwe ephepheni lemibuzo.
5. Nasele baqedile, ragela phambili ngokufunda umbuzo olandelako.
6. Landela ikambiso leyo ukufikela embuzweni wokugcina.
7. Ukusetjenziswa kwesibalisizi akukavunyelwa.
8. Isihlahlubo sinamamaksi ama-20.
9. Isihlahlubo sithatha imizuzu ema-60.
10. Yenza umsebenzi wokuzi jayeza nabafundi.

Umsebenzi wokuzi jayeza

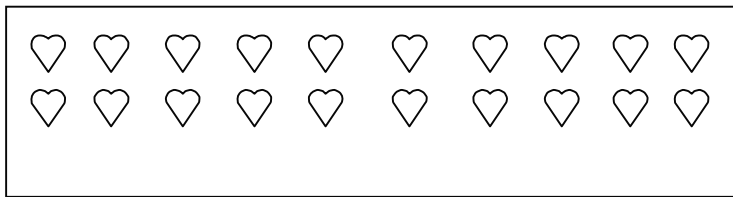
$8 - 5 = 3$: Ipendulo ngokusebenzisa indlela yeembalo zehloko
nofana

Ipendulo ngokusebenzisa iinthombe.



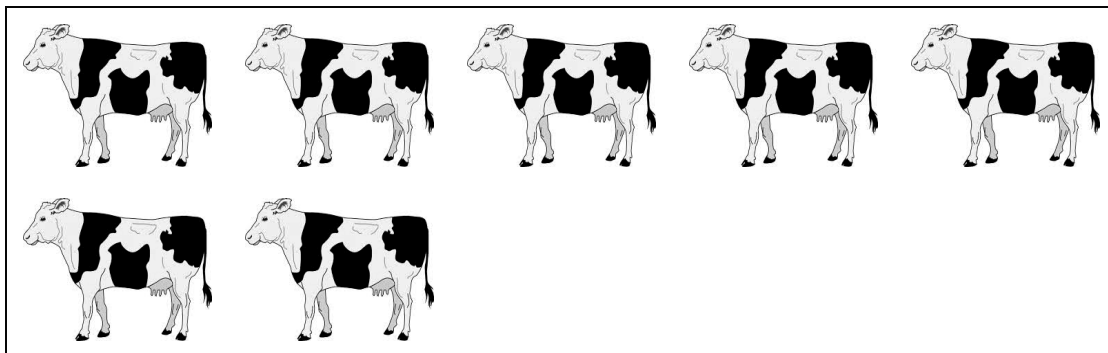
Isihlahlubo sithoma ekhasini elilandelako.

1. Bala iinthombe zeehliziyo.



Kunama _____ weenthombe zeehliziyo.

2. Bala iinthombe zeenkomo bese uqedelela u-2.1 no-2.2.



2.1. Itshwayo lenomboro li _____.

2.2 Igama lenomboro li _____.

3. Tlola iinomboro lezi ukusuka kencani ukuya kekulu.

13, 8, 3, 4, 11

_____, _____, _____, _____, _____

4. Phendula u-4.1 no-4.2.

4.1 Ihafu ye- $\frac{1}{4}$ = _____.


4.2 Hlukanisa inomboro

$$15 = \underline{\hspace{2cm}} + \underline{\hspace{2cm}}.$$

5. UXolani uze nabomabula abali-15 esikolweni. Wabuyela ekhaya nabomabula abali-11. Ulahlekelwe bomabula abangaki esikolweni?


6. Qala iinthombe ezingenzi.

Mangaki amavili weentsikiri ezisithandathu nasele zizoke? Tlola umut jho weenomboro emudeni ongenzasi.



_____ = _____

7. Yaba amakuke ali-12 ebantwaneni aba-3 ngokulinganako.



Umntwana ngamunye uzakuthola amakuke amangaki?

Umntwana ngamunye uzakuthola amakuke ama_____.

8. U-Ela uthenga irula ngama-R6,00. Uzakubuyelwa yit jhent jhi yamalini nakabhadele nge-R10 yephepha?

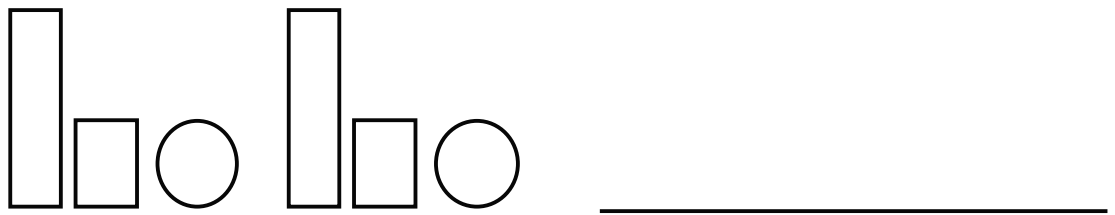
Uzakuthola it jhent jhi yama-R_____.

9. Zalisa ngependulo.

$$8 + 3 = \boxed{}$$

10. Phendula u-10.1 no-10.2.

10.1 Buyelela iphetheni kanye kwaphela.




10.2 Qedelela iphethini yeenomboro


20	19	18			15
----	----	----	--	--	----

11. Phendula u-11.1 no-11.2.

11.1 Faka itshwayo (x) e jameni elinamahlangothi a jame rwe.



11.2 Thala umuda wesimethri.

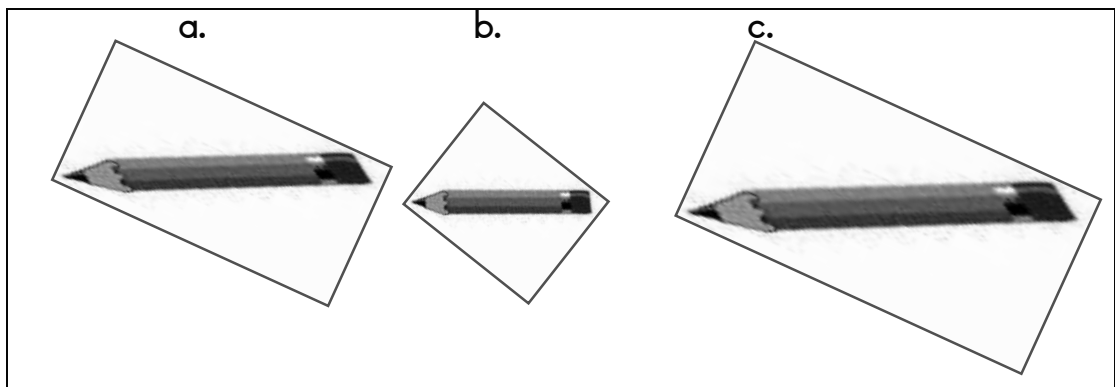


12. Zalisa ilanga leveke elitlhayelako.

uLesibili, uMgqibelo, uLesine, uSondo, uLesihlanu, uMvulo,
uLesithathu

uMvulo
uLesibili
uLesithathu
uLesine
uMgqibelo
uSondo

13. Faka itshwayo (x) phezu kwepensela encani khulu.



14. Qala igrafu yeenthombe bese uphendula umbuzo olandelako.

Imali ebuthelwe ikhambo leZu	
Thato	
Lucy	
John	
Lerato	

Ngubani obuthelwe imali enengi kunabanye? _____

INANI: 20

