



basic education

Department:
Basic Education
REPUBLIC OF SOUTH AFRICA

AMAMAKI

UKUHLOLA KUKAZWELONKE KONYAKA NONYAKA -2013 IBANGA LOKU-1 IMETHAMETHIKISI - ISIZULU ISIVIVINYO

AMAMAKI: 20

ISIKHATHI: 1 IHORA

ISIFUNDAZWE _____

IRIJINI _____

ISIFUNDA _____

IGAMA LESIKOLE _____

INAMBA YE-EMISI (9 amadijithi)

--	--	--	--	--	--	--	--	--

IKILASI (Isb. 1A) _____

ISIBONGO _____

IGAMA _____

UBULILI (✓)

UMFANA

INTOMBAZANE

USUKU LOKUZALWA

C	C	Y	Y	M	M	D	D
---	---	---	---	---	---	---	---

Lesi sivivinyo sinamakhasi ayisi-7, ngaphandle kwekhava

I miyalelo ka thisha:

1. Funda umbuzo ngamunye ungasheshi futhi mawuzwakale kubaFundi.
2. Funda umbuzo kabili, abafundi balandele emabhukwini abo.
3. Banike isikhathi sokubhala izimpendulo ngokwabo ezikhaleni ezinikeziwe.
4. Uma sebeqedile ukubhala, qhubeka uFunde umbuzo olandelayo.
5. Landela inqubo efanayo kuze kufike embuzweni wokugcina.
6. Ungavumi ukuthi abafundi basebenzise amakhalukhuletha.
7. I sivivinyo sinamamaki angama-20.
8. I sivivinyo siyimizuzu engama-60
9. Yenza imisebenzi yokuzilungiselela nabaFundi.

I misebenzi yokuzilungiselela

$13 - 9 = 4$ usebenzise indlela yokwenza izibalo zekhanda.

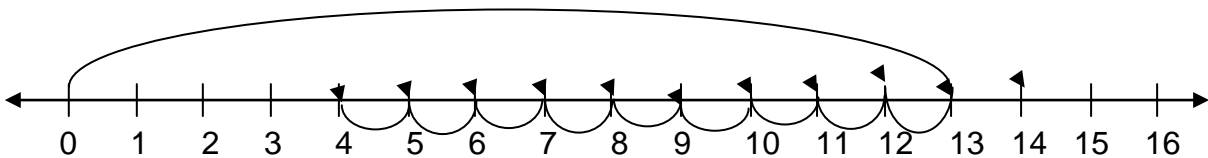
noma

I mpendulo: usebenzise izithombe.



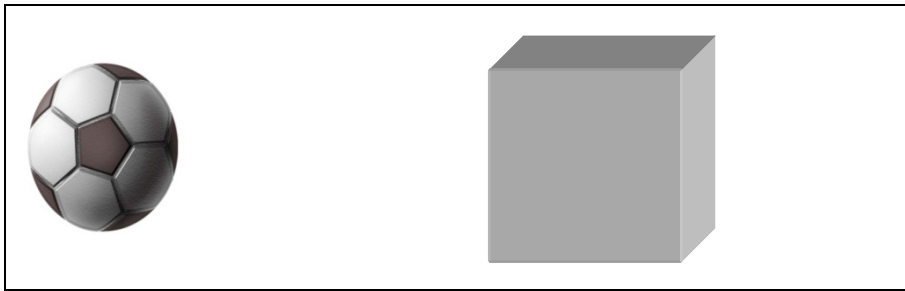
noma

I mpendulo: usebenzise ulayini wezinamba.

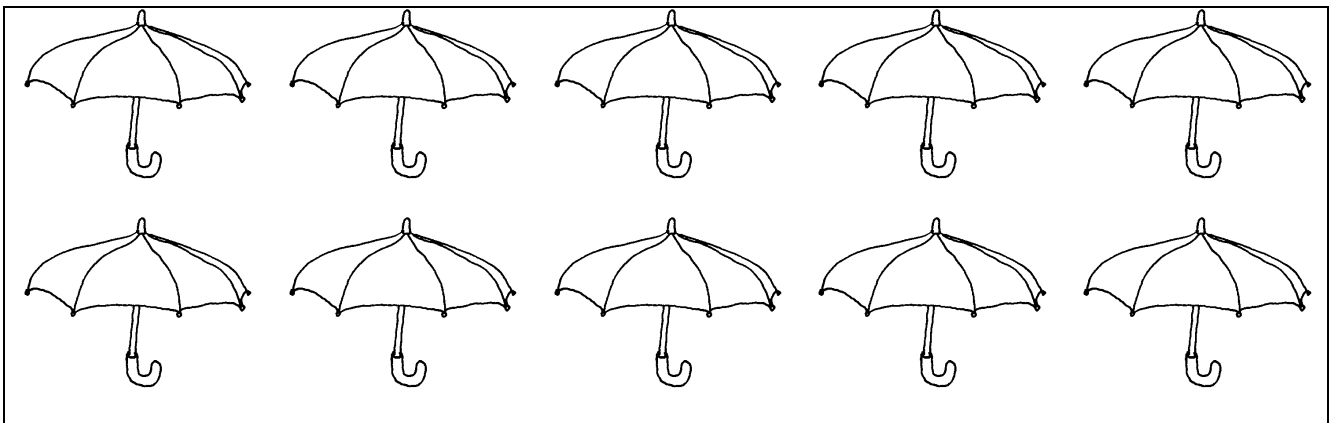


I sivivinyo siqala ekhasini ellandelayo.

1. Faka uphawu (x) esithombeni sento engashelela.



2. Bala inani lezambulela bese ulibhala phansi.



2.1 Inamba ngophawu. _____

2.2 Inamba ngamagama. _____

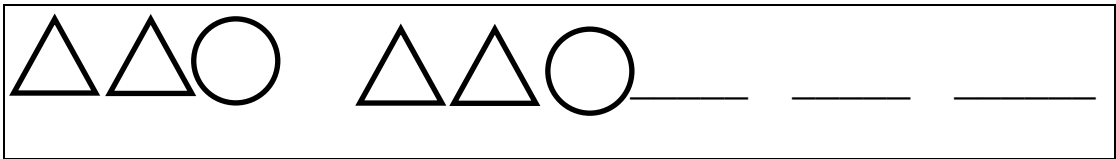
3. Gcwalisa ngezinamba ezifanele ezikhaleni ezishiyiwe.

20	30			60		80
----	----	--	--	----	--	----

4. Qedela lesi sibalo.

$$12 - 3 = \square$$


5. Dweba amasheyiphu amathathu alandelayo ukuqedela iphet hini elingezansi.



6. Gwalisa izikhala ngokufaka izinamba ezishiyiwe kuleli phet hini.

2; 12; _____; 32; 42; 52

7. Mangaki amasondo amabhayisikili ayisi-7?



8. Hlela izinamba ezilandelayo kusukela kwencane kunazo zonke kuya kwenkulu kunazo zonke.

12 9 3 7 15

9. Lezi izinyanga zonyaka:

uJanuwari, uFebhruwari, uMashi, u-Aphreli,
uMeyi, uJuni, uJulayi, u-Agasti, uSeph'themba, u-Okthoba,
uNovemba, uDisemba.

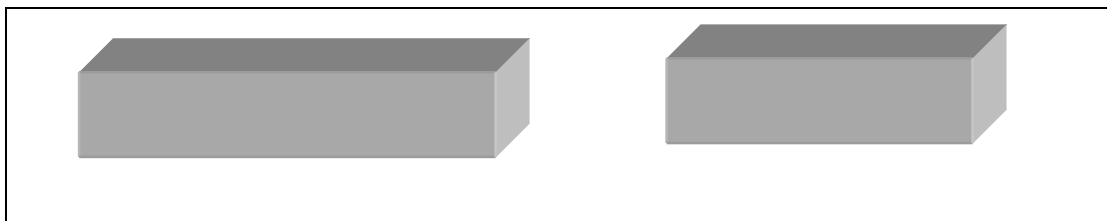
Yiphi inyanga engeyesithathu emva kukaMeyi?

10. Hlukanisela abangane aba-3 amakhekhe ayisi-9.



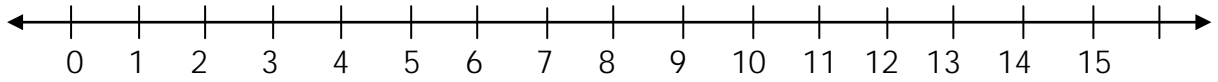
Emunye uzothola amakhekhe a - _____.

11. Faka uphawu (x) phezu kwento ende kunenye.



12. Sebenzisa ulayini wezinamba ukuxazulula isibalo esingezansi

$$4 + 2 + 2 =$$




13. Uhhafu we-12 =

14. Dweba izithombe ukuxazulula isibalo esiyingxoxo.

ULerato unoswidi abayi-11, uThemba unoswidi aba-5.
Ushoda ngoswidi abangaki uThemba ukuze balingane nabakaLerato?

UThemba ushoda ngoswidi aba _____ngaphansi kwabakaLerato.

15. Umama uthenge ibhola ngo-R5,00 nama-aphula amabili ngo-R2,00 lilinye. Ukhokha ngemali eyiphepha ewu-R10,00.




15.1 Uthenge ngamalini isiyonke?

R____

15.2 I malini ushintshi wakhe?











R____

16. Dweba ulayini phakathi naphakathi kulo mfanekiso ube yizingxenye ezimbili ezilingana nse.



17. Bukisa le grafu bese uphendula umbuzo ohambisana nayo.

I zimoto eziqoqwe ikilasi lebanga loku-1.

Inamba yezimoto	5				
	4				
	3				
	2				
	1				
		uSipho	uThandi	uPhelele	uNesi

Ziningi ngokungakanani izimoto eziqoqwe uThandi kunezikaPhelele?

I samba: 20