



basic education

Department:
Basic Education
REPUBLIC OF SOUTH AFRICA

AMAMAKI

UKUHLOLA KUKAZWELONKE KONYAKA NONYAKA 2014 IBANGA 1 IZIBALO: ISIZULU ISIVIVINYO

AMAMAKI: 20

ISIKHATHI: 1 IHORA

ISIFUNDAZWE _____

ISIFUNDA _____

ISEKETHE _____

IGAMA LESIKOLE _____

INOMBOLO YE -EMISI (9 amadijithi)

--	--	--	--	--	--	--	--	--

IKILASI (Isib. 1A) _____

ISIBONGO _____

IGAMA _____

UBULILI (✓)

UMFANA

INTOMBAZANE

USUKU LOKUZALWA

C	C	Y	Y	M	M	D	D
---	---	---	---	---	---	---	---

Lesi sivivinyo sinamakhasi ayi-8 ungayibali ikhava.

Imiyalelo kathisha:

1. Fundela abafundi umbuzo ngamunye ungasheshi futhi uzwakale kahle.
2. Funda okungenani kabili, ngenkathi abafundi befunda belandela ezincwadini zabo.
3. Banike isikhathi sokubhala izimpendulo ngokwabo, ezikhaleni ezinikeziwe.
4. Wonke umsebenzi mawenziwe emaphepheni okuphendulela.
5. Uma sebeqedile ukubhala, qhubeka ufunde umbuzo olandelayo.
6. Landela inqubo efanayo kuze kufike embuzweni wokugcina.
7. Ungavumi ukuthi abafundi basebenzise amakhalukhuletha.
8. Isivivinyo sinamamaki angama-20.
9. Ubude besivivinyo buyimizuzu engama-60.
10. Yenza umsebenzi yokuzilungiselela nabafundi.

Umsebenzi wokuzilungiselela

$8 - 5 = 3$. Impendulo ngokusebenzisa izibalo zekhanda.


noma

Impendulo ngokusebenzisa izithombe/umdwabo.



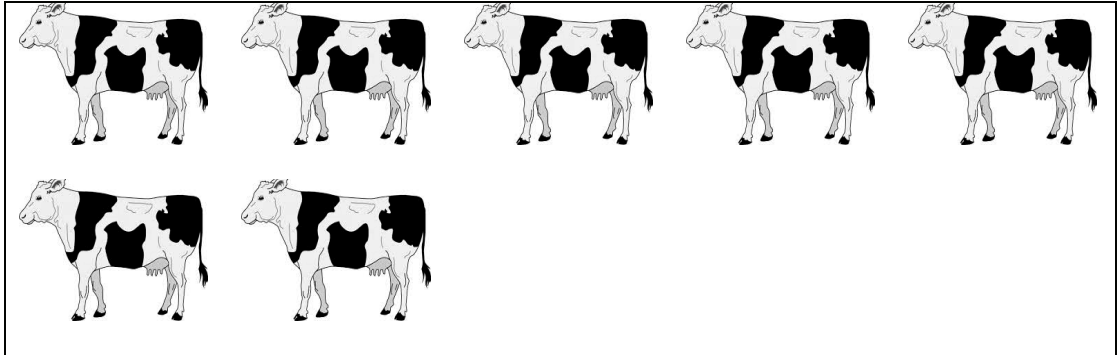
Isivivinyo siqala ekhasini elilandelayo.

1. Bala izithombe zezinhliziyi.



Izithombe zezinhliziyi zinga_____.

2. Bala lezi zithombe zezinkomo ezilandelayo bese uphendula
2.1 no 2.2.



2.1. Uphawu lwenombolo yi _____.

2.2 ama lenombolo _____.

3. Hlela lezi zinombolo kusukela kwencane kuye kwenkulu.

13, 8, 3, 4, 11

_____, _____, _____, _____, _____

4. Phendula 4.1 no 4.2.


4.1 Uhhafu we-1/4 _____.

4.2 Hlakaza le nombolo.

$$15 = \underline{\quad} + \underline{\quad}$$

5. UXolo waya esikoleni enezimabuli eziyi-15. Wabuyela ekhaya esenezimabuli eziyi-11. Zingaki izimabuli ezalahleka?

6. Buka lesi sithombe esingezansi. Anamasondo amangaki la mabhayisikili? Bhala umusho wezinombolo emgqeni ongezansi.




_____ = _____

7. Hlukanisela abantwana aba-3 amabhisikidi ayi-12 ngokulingana. Mangaki amabhisikidi azotholwa umntwana ngamunye?



Umntwana ngamunye uzothola amabhisikidi a-_____.

8. ULethu wathenga irula ngama-R6, 00. Uzothola ushintshi wamalini uma ekhokha ngo-R10 wephepha?



Ushintshi wakhe ngu-R_____

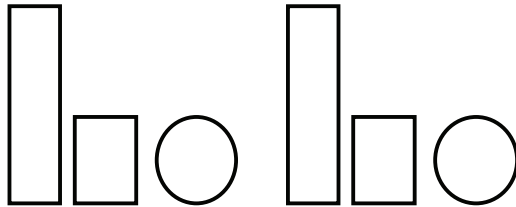
9. Gcwalisa ngempendulo efanele.

$$8 + 3 = \square$$



10. Phendula 10.1 no 10.2.

10.1 Yandisa kanye lo mdwebo oyiphethini.




10.2 Qedela leli phethini lezinombolo.


20	19	18			15
----	----	----	--	--	----

11. Phendula 11.1 no 11.2.

11.1 Faka lolu phawu (x) esimweni esinamacala aqondile.



11.2 Dweba umugqa owodwa kuphela ohlukanisa kabili lesi simo (isimetri).

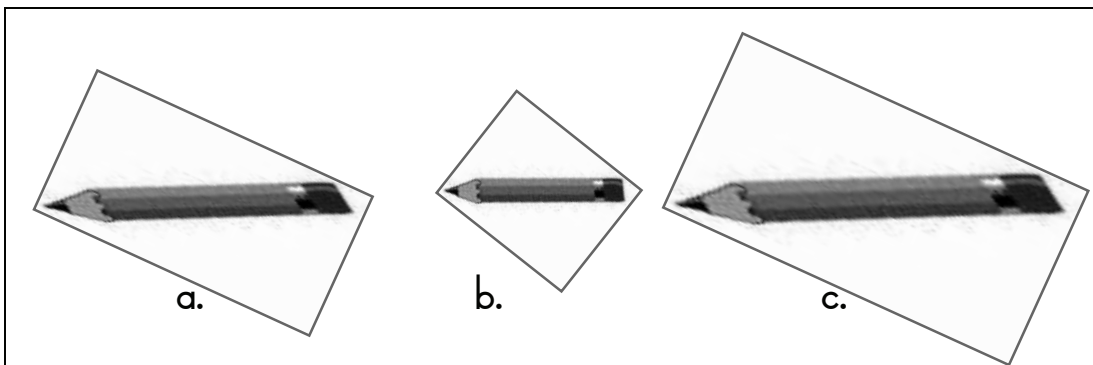


12. Gcwalisa ngosuku lwesonto olushiyiwe.





uLwesibili, uMgqibelo, uLwesine, iSonto, uLwesihlanu,
uMsombuluko, uLwesithathu

uMsombuluko
uLwesibili
uLwesithathu
uLwesine
uMgqibelo
iSonto

13. Dweba lolu phawu (x) phezu kwepensela elifishane.



14. Buka le grafu yezithombe bese uphendula umbuzo olandelayo.

Imali eqoqelwe ukuya esiqiwini	
uKhaya	
u-Anele	
uNozipho	
u-Aphiwe	

Ngubani oqoqe imali eningi kakhulu? _____

ISAMBA: 20