



# basic education

Department:  
Basic Education  
**REPUBLIC OF SOUTH AFRICA**

**NATIONAL  
SENIOR CERTIFICATE  
NASIONALE  
SENIOR SERTIFIKAAT**

**GRADE/GRAAD 12**

**MATHEMATICS P2/WISKUNDE V2**

**NOVEMBER 2012**

**MEMORANDUM**

**MARKS/PUNTE: 150**

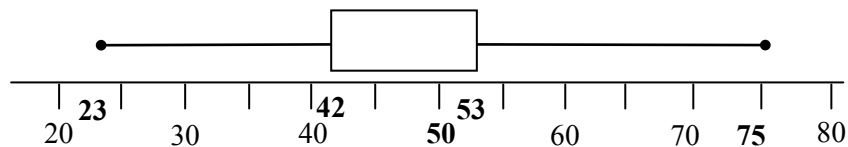
**This memorandum consists of 23 pages.  
*Hierdie memorandum bestaan uit 23 bladsye.***

**NOTE:**

- If a candidate answered a question TWICE, mark only the first attempt.
- If a candidate crossed out an attempt of a question and did not redo the question, mark the crossed-out question.
- Consistent accuracy applies in ALL aspects of the marking memorandum.
- Assuming values/answers in order to solve a problem is unacceptable.

**LET WEL:**

- As 'n kandidaat 'n vraag TWEE keer beantwoord het, merk slegs die eerste poging.
- As 'n kandidaat 'n antwoord deurgehaal en nie oorgedoen het nie, merk die deurgehaalde antwoord.
- Volgehoue akkuraatheid is DEURGAANS in ALLE aspekte van die memorandum van toepassing.
- Aanvaarding van waardes/antwoorde om 'n problem op te los, is onaanvaarbaar.

**QUESTION/VRAAG 1**

1.1	Interquartile range/ <i>Interkwartielvariasiewydte</i> = $53 - 42 = 11$ <div style="border: 1px solid black; padding: 5px; width: fit-content; margin: 10px auto;">             Answer only: Full marks No CA           </div>	✓ critical values (42 ; 53) ✓ 11 (2)
1.2	25% of trees have a height in excess of 53 cm. <i>25% van bome het 'n hoogte van meer as 53 cm.</i>	✓✓ 25% (2)
1.3	Between $Q_2(50)$ and $Q_3(53)$ / <i>Tussen <math>Q_2</math> en <math>Q_3</math></i>  <b>REASON / REDE</b> The distance between these two quartiles is the smallest/ <i>Die afstand tussen hierdie twee kwartiele is die kleinste.</i>  <b>OR</b> The third quarter has smallest length / <i>Die derde kwart het die kortste lengte</i>	✓ $Q_2$ and $Q_3$ ✓ reason (2)
		<b>[6]</b>

**QUESTION/VRAAG 2**

<p>2.1 and/en 2.2</p>		<p>6 points correctly plotted (3 marks)</p> <p>4 points correctly plotted (2 marks)</p> <p>2 points correctly plotted (1 mark) (3)</p> <p>✓ exponential curve/ eksponensiale kromme (1)</p>
<p>2.3</p>	<p>The trend shows that as the blood alcohol levels increase, the risk of having an accident increases rapidly. <i>Die tendens(neiging) toon dat indien die bloed-alkoholvlakke toeneem, die risiko van 'n motorongeluk neem vinnig toe.</i></p>	<p>✓ reason (1)</p>
<p>2.4</p>	<p>Approximately 47% (Accept 44% - 51%)</p>	<p>✓✓ 47% (2) <b>[7]</b></p>

**QUESTION/VRAAG 3**

<p>3.1</p>	<p>more than 15 minutes: <math>140 - 104 = 36</math> people Approximately 36 people (Accept 34 – 37)</p> <div style="border: 1px solid black; padding: 2px; display: inline-block;">Answer only: Full marks</div>	<p>✓ 104 ✓ 36 (2)</p>
<p>3.2</p>	<p>At 8 minutes approximately 27 people and at 12 minutes approximately 62 people left the auditorium/<i>By 8 minute het ongeveer 27 mense en by 12 minute ongeveer 62 mense die ouditorium verlaat.</i> <math>\therefore 62 - 27 = 35</math> Approximately 35 people left the auditorium between 8 and 12 minutes/<i>Ongeveer 35 mense het tussen 8 en 12 minute die ouditorium verlaat.</i></p>	<p>✓ 27 and 62 ✓ 35 (Accept 33 – 36) (2)</p>
<p>3.3</p>	<p>Modal class/modale klas: <math>11 &lt; x \leq 16</math> <b>OR</b> <math>11 \leq x &lt; 16</math></p> <div style="border: 1px solid black; padding: 2px; display: inline-block;">Mark for critical values</div>	<p>✓ <math>11 &lt; x \leq 16</math> ✓ <math>11 \leq x &lt; 16</math> (1) <b>[5]</b></p>

**QUESTION/VRAAG 4**

	SCHOOL A	SCHOOL B	SCHOOL C
Mean	9,8	9,8	14,8
Standard deviation	2,3	3,1	2,3

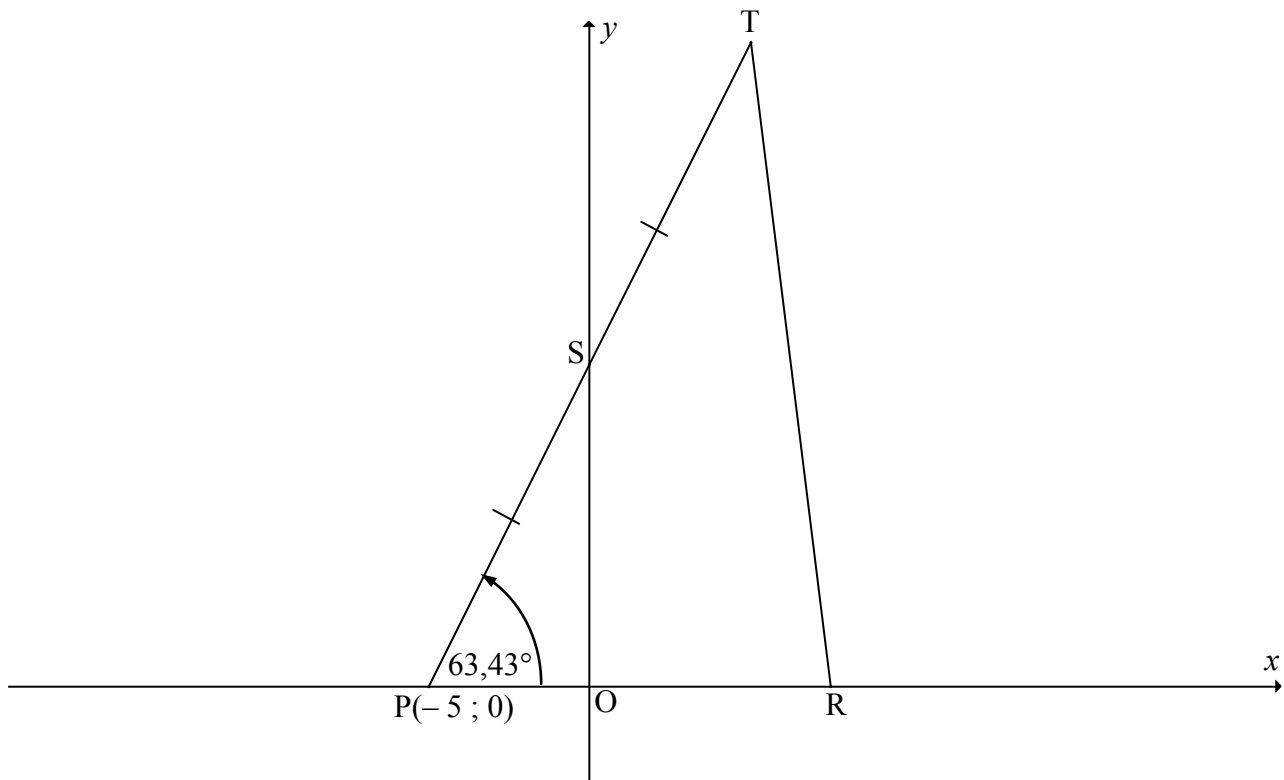
4.1	School B, because the standard deviation of B is the largest. <i>Skool B, want die standaardafwyking is die grootste.</i>	✓ School B ✓ reason (2)
4.2	There is no difference in the spread of the marks. <i>Daar is geen verskil in die verspreiding van punte nie.</i>	✓ no difference / the same (1)
4.3	Add/increase each score in School A by 5 marks. <i>Vermeerder(tel by) elke punt in Skool A met 5 punte.</i>	✓ increase each mark <i>vermeerder elke punt</i> ✓ 5 marks (2)
4.4	The mean will decrease ( by 10% ) <i>Die gemiddelde sal verminder (met 10%).</i>  The standard deviation will also decrease (by 10% ) <i>Die standaardafwyking sal verminder (ook met 10%).</i>	✓ mean decreased <i>/gemiddeld verminder</i>  ✓ SD decreased/ <i>SD verminder</i> (2) <b>[7]</b>

Explanation why values decrease by 10%:

$$\text{mean} = \frac{\sum 0,9x_i}{n} = 0,9 \frac{\sum x_i}{n} = 0,9\bar{x}$$

$$SD = \sqrt{\frac{\sum (x_i - \bar{x})^2}{n}} = \sqrt{\frac{\sum (0,9x_i - 0,9\bar{x})^2}{n}} = \sqrt{\frac{0,9^2 \sum (x_i - \bar{x})^2}{n}} = 0,9 \sqrt{\frac{\sum (x_i - \bar{x})^2}{n}}$$

**QUESTION/VRAAG 5**



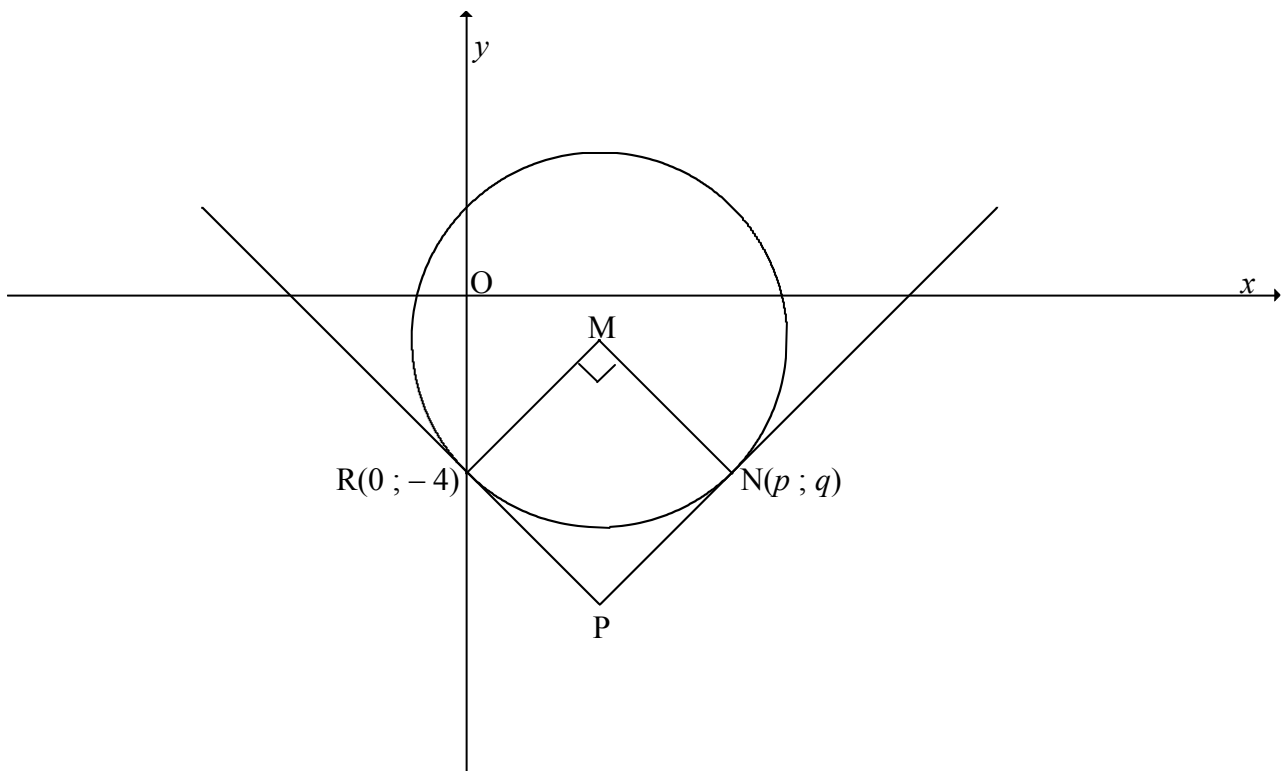
<p>5.1.1</p>	$m_{PT} = \tan 63,43^\circ$ $= 2$	<p>✓ <math>\tan 63,43^\circ</math> ✓ 2 (2) Answer only: full marks</p>
<p>5.1.2</p>	<p>Coordinates of P(-5 ; 0)  <math>y - y_1 = m(x - x_1)</math>  <math>y - 0 = 2(x + 5)</math>  <math>y = 2x + 10</math></p> <p style="text-align: center;"><b>OR</b></p> <p><math>y = mx + c</math>  <math>0 = (2)(-5) + c</math>  <math>c = 10</math>  <math>y = 2x + 10</math></p> <p style="text-align: center;"><b>OR</b></p> <p><math>m_{PT} = 2 = \tan 63,43^\circ</math>  <math>\tan 63,43^\circ = \frac{OS}{OP} = \frac{OS}{5} = 2</math>  <math>\therefore OS = 10</math>  <math>y = 2x + 10</math></p>	<p>✓ substitution of P(-5 ; 0) and <math>m = 2</math> into equation          ✓ equation (2)</p> <p>✓ substitution of P(-5 ; 0) and <math>m = 2</math> into equation          ✓ equation (2)</p> <p>✓ <math>\frac{OS}{5} = 2</math>          ✓ equation (2)</p>

<p>5.1.3</p>	<p>OS = 10 units  <math>PS^2 = (5)^2 + (10)^2</math>  <math>= 125</math>  <math>PS = \sqrt{125} = 5\sqrt{5}</math> <span style="border: 1px solid black; padding: 2px;">Accept PS = 11,18</span></p> <p style="text-align: center;"><b>OR</b></p> <p>P(-5 ; 0) ; OS = 10 units  <math>PS^2 = (-5 - 0)^2 + (0 - 10)^2</math>  <math>= 25 + 100</math>  <math>= 125</math>  <math>PS = \sqrt{125} = 5\sqrt{5}</math> <span style="border: 1px solid black; padding: 2px;">Accept PS = 11,18</span></p> <p style="text-align: center;"><b>OR</b></p> <p><math>\frac{PS}{5} = \frac{1}{\cos 63,43^\circ}</math>  <math>\therefore PS = \frac{5}{\cos 63,43^\circ}</math>  <math>PS = 11,18</math></p> <p style="text-align: center;"><b>OR</b></p> <p><math>\frac{PS}{10} = \frac{1}{\sin 63,43^\circ}</math>  <math>\therefore PS = \frac{10}{\sin 63,43^\circ}</math>  <math>PS = 11,18</math></p>	<p>✓ OS = 10                  ✓ substitution of correct distances into Pythagoras                  ✓ <math>\sqrt{125}</math> (3)</p> <p>✓ OS = 10                  ✓ substitution of correct distances into Pythagoras                  ✓ <math>\sqrt{125}</math> (3)</p> <p>✓ ratio                  ✓ <math>PS = \frac{5}{\cos 63,43^\circ}</math>                  ✓ 11,18 (3)</p> <p>✓ ratio                  ✓ <math>PS = \frac{10}{\sin 63,43^\circ}</math>                  ✓ 11,18 (3)</p>
<p>5.1.4</p>	<p>Let T be (x ; y). Then  <math>\frac{-5+x}{2} = 0</math> and <math>\frac{0+y}{2} = 10</math>  <math>x = 5</math>                      <math>y = 20</math>                  T(5 ; 20)</p> <p style="text-align: center;"><b>OR</b></p> <p>by inspection: T(5 ; 20)</p>	<p>✓ 5                  ✓ 20 (2)</p> <p>✓ 5                  ✓ 20 (2)</p>
<p>5.2</p>	<p><math>OR = \left(\frac{3}{2}\right)(5) = \frac{15}{2} = 7,5</math>  <math>R\left(\frac{15}{2}; 0\right)</math> <span style="border: 1px solid black; padding: 2px;">If only x-coordinate : 2 marks</span></p>	<p>✓ <math>x = 7,5 / \frac{15}{2}</math>                  ✓ <math>y = 0</math> (2)</p>

5.3	$\text{Area } \Delta PTR = \frac{1}{2}(\text{base PR}) \times (\text{height})$ $= \frac{1}{2}\left(5 + \frac{15}{2}\right) \times 20$ $= 125 \text{ square units}$ <p style="text-align: center;"><b>OR</b></p> $\text{Area } \Delta PTR = \frac{1}{2} PT \cdot PR \cdot \sin \hat{TPR}$ $= \frac{1}{2} \left(10\sqrt{5}\right) \left(\frac{25}{2}\right) \sin 63,43^\circ$ $= 124,99 \text{ square units}$	✓ area formula ✓ $5 + \frac{15}{2} = 12,5$ ✓ 20 ✓ 125 (4)
		✓ area formula ✓ $10\sqrt{5}$ ✓ $\frac{25}{2}$ ✓ 124,99 (4)

**[15]**

**QUESTION/VRAAG 6**



<p>6.1</p>	$x^2 + y^2 - 6x + 2y - 8 = 0$ $x^2 - 6x + 9 + y^2 + 2y + 1 = 8 + 9 + 1$ $(x - 3)^2 + (y + 1)^2 = 18$ $\therefore M(3; -1)$ <div style="border: 1px solid black; padding: 5px; margin: 10px auto; width: fit-content;"> <p>If only  <math>(x - 3)^2 + (y + 1)^2 = r^2</math> (<math>r^2 \neq 18</math>),  then 2 marks</p> </div> <p style="text-align: center;"><b>OR</b></p> $x_M = -\frac{1}{2}(\text{coefficient of } x)$ $x_M = -\frac{1}{2}(-6)$ $x_M = 3$ $y_M = -\frac{1}{2}(\text{coefficient of } y)$ $y_M = -\frac{1}{2}(2)$ $y_M = -1$ $\therefore M(3; -1)$	$\begin{aligned} &\checkmark x^2 - 6x + 9 \\ &\checkmark y^2 + 2y + 1 \\ &\checkmark (x - 3)^2 \\ &\checkmark (y + 1)^2 \end{aligned} \quad (4)$  $\begin{aligned} &\checkmark x_M = -\frac{1}{2}(-6) \\ &\checkmark x_M = 3 \end{aligned}$  $\begin{aligned} &\checkmark y_M = -\frac{1}{2}(2) \\ &\checkmark y_M = -1 \end{aligned} \quad (4)$
------------	---	--



<p>6.2</p>	$m_{RM} = \frac{-1 - (-4)}{3 - 0}$ $= 1$ <p>y-intercept is <math>-4</math>  <math>y = x - 4</math></p>	<p>✓ substitution into gradient formula                  ✓ <math>m_{RM} = 1</math>                  ✓ equation                  (3)</p>
<p>6.3</p>	<p>MR <math>\perp</math> RP (radius <math>\perp</math> tangent/raaklyn)  <math>m_{MN} = m_{PR} = -1</math>  <math>\frac{q - (-1)}{p - 3} = -1</math>  <math>-p + 3 = q + 1</math>  <math>q = 2 - p</math></p> <p style="text-align: center;"><b>OR</b></p> <p>MR <math>\perp</math> RP (radius <math>\perp</math> tangent/raaklyn)  <math>m_{MN} = m_{PR} = -1</math>  <math>y - (-1) = -1(x - 3)</math>  <math>y + 1 = -x + 3</math>  <math>y = -x + 2</math>  <math>q = 2 - p</math></p>	<p>✓✓ <math>m_{MN} = -1</math>                  ✓ substitution into gradient formula                  ✓ <math>-p + 3 = q + 1</math>                  (4)</p> <p>✓✓ <math>m_{MN} = -1</math>                  ✓ <math>y = -x + 2</math>                  ✓ substitution into equation of line                  (4)</p>
<p>6.4</p>	$(x - 3)^2 + (y + 1)^2 = 18$ $(p - 3)^2 + (q + 1)^2 = 18$ $(2 - q - 3)^2 + (q + 1)^2 = 18$ $q^2 + 2q + 1 + q^2 + 2q + 1 - 18 = 0$ $2q^2 + 4q - 16 = 0$ $q^2 + 2q - 8 = 0$ $(q + 4)(q - 2) = 0$ $q = -4 \text{ or } q \neq 2$ $p = 6$ <p style="text-align: center;"><b>OR</b></p> <p>MRPN is a square/vierkant (rectangle with/reghoek met  <math>MN = MR</math>)  <math>\therefore \hat{MPN} = 45^\circ</math>                  But MR has a slope/gradient of 1, so RN <math>\parallel</math> x-axis  <math>\therefore q = -4</math> and <math>p = 2 - (-4) = 6</math></p> <p style="text-align: center;"><b>OR</b></p>	<p>✓ method                  ✓✓ <math>q = -4</math>                  ✓✓ <math>p = 6</math>                  (5)</p> <p>✓ method                  ✓✓ <math>q = -4</math>                  ✓✓ <math>p = 6</math>                  (5)</p>

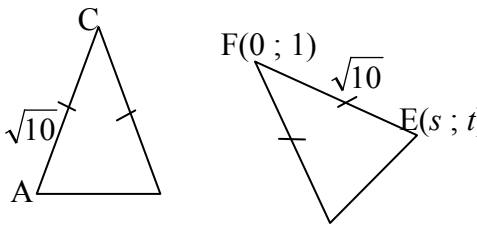
	$q = 2 - p$ $(p - 3)^2 + (2 - p + 1)^2 = 18$ $(p - 3)^2 = 9$ $\therefore p - 3 = 3 \quad (p > 0)$ $p = 6$ $\therefore q = -4$ <p style="text-align: center;"><b>OR</b></p> <p>Using symmetry: <math>q = -4</math> (since <math>y_M = y_R</math>)  <math>-4 = 2 - p</math>  <math>p = 6</math></p> <div style="border: 1px solid black; padding: 5px; display: inline-block;"> <p style="text-align: center;"><b>OR</b></p> <math>p = 2 \times 3 \quad (\text{since } x_M = 2x_N)</math> </div>	<p>✓ method</p> <p>✓✓ <math>p = 6</math> ✓✓ <math>q = -4</math></p> <p style="text-align: right;">(5)</p> <p>✓ method ✓✓ <math>q</math> ✓✓ <math>p</math></p> <p style="text-align: right;">(5)</p>
6.5	$r^2 = (6)^2 + (-4)^2$ $= 36 + 16 = 52$ $x^2 + y^2 = 52$ <p style="text-align: center;"><b>OR</b></p> $p^2 + q^2 = (6)^2 + (-4)^2$ $= 36 + 16 = 52$ $x^2 + y^2 = p^2 + q^2$ $= 52$	<p>✓ substitution</p> <p>✓ equation</p> <p style="text-align: right;">(2)</p> <p>✓ substitution</p> <p>✓ equation</p> <p style="text-align: right;">(2)</p>
6.6	<p>area of circle M = <math>\pi r^2</math></p> $= \pi(\sqrt{18})^2$ $= 18\pi \text{ square units}$ $= 56,55 \text{ square units}$	<p>✓ <math>r = \sqrt{18}</math></p> <p>✓ area of circle</p> <p style="text-align: right;">(2)</p>
6.7	<p>MRPN is a square (all angles equals <math>90^\circ</math>, adj sides equal)</p> <p><math>\widehat{NMP} = 45^\circ</math> (diagonals of a square bisect the angles/<i>hoeklyne van vierkant halveer hoeke</i>)</p> $\frac{NP}{MP} = \sin \widehat{NMP}$ $= \sin 45^\circ$ $= \frac{1}{\sqrt{2}} \text{ or } \frac{\sqrt{2}}{2}$ <p style="text-align: center;"><b>OR</b></p> <p>MRPN is a square (all angles equals <math>90^\circ</math>, adj sides equal)</p> $MP^2 = 18 + 18$ $= 36$ $MP = 6$ $\frac{NP}{MP} = \frac{\sqrt{18}}{6} = \frac{1}{\sqrt{2}} \text{ or } \frac{\sqrt{2}}{2}$	<p>✓ <math>\widehat{NMP} = 45^\circ</math></p> <p>✓✓ <math>\frac{NP}{MP} = \sin \widehat{NMP}</math></p> <p>✓ <math>\frac{1}{\sqrt{2}}</math></p> <p style="text-align: right;">(4)</p> <p>✓ <math>MN^2 = 18</math> ✓ <math>MP^2 = 36</math></p> <p>✓ 6 ✓ <math>\frac{1}{\sqrt{2}}</math></p> <p style="text-align: right;">(4)</p>

<b>OR</b>	
By inspection: P(3 ; - 7)	✓ P(3 ; - 7)
$\frac{NP}{MP} = \frac{\sqrt{(6-3)^2 + (4-7)^2}}{\sqrt{(3-3)^2 + (-7+1)^2}}$	✓ NP <sup>2</sup> = 18
$= \frac{\sqrt{18}}{6} = \frac{1}{\sqrt{2}} \text{ or } \frac{\sqrt{2}}{2}$	✓ MP = 6
	✓ $\frac{1}{\sqrt{2}}$
	(4)
	<b>[24]</b>

**QUESTION/VRAAG 7**

7.1	$(x ; y) \rightarrow (y ; -x) \rightarrow (-y ; -x)$	✓ $(y ; -x)$ ✓ $(-y ; -x)$ (2)
7.2	$(x ; y) \rightarrow (-x ; y) \rightarrow (y ; x)$	✓ $(-x ; y)$ ✓ $(y ; x)$ (2)
7.3	Mo's claim is correct/ <i>Mo se bewering is korrek.</i> If order was unimportant then the image of P would be the same in both cases. This is not so./ <i>As volgorde onbelangrik is, sal die beeld van P in beide gevalle dieselfde wees. Wat nie so is nie.</i>  <p style="text-align: center;"><b>OR</b></p> Choose any point $\neq (0 ; 0)$ and show that their images both cases are not the same. For example: $(3 ; 4) \rightarrow (4 ; -3) \rightarrow (-4 ; -3)$ $(3 ; 4) \rightarrow (-3 ; 4) \rightarrow (4 ; 3)$ Mo is correct	✓ Mo ✓ reason (2)  ✓ calculation of both images ✓ Mo (2) <b>[6]</b>

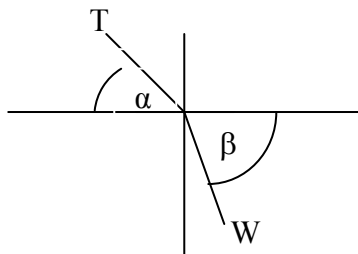
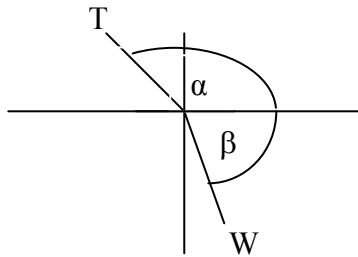
**QUESTION/VRAAG 8**

8.1	$\Delta ABC$ is translated by 4 units to the left and 4 units up/ $\Delta ABC$ word getransleer met 4 eenhede na links en 4 eenhede opwaarts. <div style="border: 1px solid black; padding: 5px; display: inline-block; margin: 10px 0;">Accept <math>(x ; y) \rightarrow (x - 4 ; y + 4)</math></div>	✓ translation/ <i>translasie</i> ✓ 4 left/ <i>links</i> and 4 up/ <i>opwaarts</i> (2)
8.2	$R'(3 ; -4)$	✓ 3 ✓ -4 (2)
8.3.1	Area $\Delta A'B'C' = 16 \times$ Area of $\Delta ABC$ Scale factor/ <i>skaalfaktor</i> = 4	✓ 4 (1)
8.3.2	$AC = \sqrt{10}$ $A'C' = 4\sqrt{10}$	✓ $4\sqrt{10}$ (1)
8.4	$EF = AC$ $\sqrt{(s-0)^2 + (t-1)^2} = \sqrt{10}$ $\sqrt{s^2 + (t-1)^2} = \sqrt{10}$ $s^2 + (t-1)^2 = 10$ $s^2 + t^2 - 2t + 1 - 10 = 0$ $s^2 + t^2 - 2t - 9 = 0$	 ✓✓✓ recognising that $EF = AC$ ✓ equation in terms of $s$ and $t$ (4) <b>[10]</b>

**QUESTION/VRAAG 9**

<p>9.1</p> <p>Anti-clockwise / Anti-kloksgewys:</p> $-\frac{16}{\sqrt{2}} \cos(-\theta) - \frac{16}{\sqrt{2}} \sin(-\theta) = 8 \quad \dots(1)$ $\frac{16}{\sqrt{2}} \cos(-\theta) - \frac{16}{\sqrt{2}} \sin(-\theta) = -8\sqrt{3} \quad \dots(2)$ <p>(1) + (2): <math>-\frac{32}{\sqrt{2}} \sin(-\theta) = 8 - 8\sqrt{3}</math></p> $\sin(-\theta) = \frac{-8 + 8\sqrt{3}}{\frac{32}{\sqrt{2}}}$ $\sin \theta = \frac{-\sqrt{6} + \sqrt{2}}{4} = -0,258819\dots$ <p><math>\theta = 180^\circ + 15^\circ</math> or <math>\theta = 360^\circ - 15^\circ</math> <math>= 195^\circ</math></p> <p style="text-align: center;"><b>OR</b></p> $-\frac{16}{\sqrt{2}} \cos(-\theta) - \frac{16}{\sqrt{2}} \sin(-\theta) = 8 \quad \dots(1)$ $\frac{16}{\sqrt{2}} \cos(-\theta) - \frac{16}{\sqrt{2}} \sin(-\theta) = -8\sqrt{3} \quad \dots(2)$ <p>(1) - (2): <math>-\frac{32}{\sqrt{2}} \cos(-\theta) = 8 + 8\sqrt{3}</math></p> $\cos \theta = \frac{8 + 8\sqrt{3}}{-\frac{32}{\sqrt{2}}} = \frac{-\sqrt{6} - \sqrt{2}}{4} = -0,96592\dots$ <p><math>\theta = 180^\circ + 15^\circ</math> or <math>\theta = 180^\circ - 15^\circ</math> <math>= 195^\circ</math></p> <p style="text-align: center;"><b>OR</b></p> <p>Clockwise / Kloksgewys:</p> $-\frac{16}{\sqrt{2}} \cos(\theta) + \frac{16}{\sqrt{2}} \sin(\theta) = 8 \quad \dots(1)$ $\frac{16}{\sqrt{2}} \cos(\theta) + \frac{16}{\sqrt{2}} \sin(\theta) = -8\sqrt{3} \quad \dots(2)$ <p>(1) + (2): <math>\frac{32}{\sqrt{2}} \sin(\theta) = 8 - 8\sqrt{3}</math></p> $\sin(\theta) = \frac{8 - 8\sqrt{3}}{\frac{32}{\sqrt{2}}}$ $\sin \theta = \frac{-\sqrt{6} + \sqrt{2}}{4} = -0,258819\dots$ <p><math>\theta = 180^\circ + 15^\circ</math> or <math>\theta = 360^\circ - 15^\circ</math> <math>= 195^\circ</math></p>	<p>✓ substitution into x image of rotation</p> <p>✓ substitution into y image of rotation</p> <p>✓ addition of equations</p> <p>✓ value of sin <math>\theta</math></p> <p style="text-align: right;">(5)</p> <p>✓ 180° + 15°</p> <p>✓ substitution into x image of rotation</p> <p>✓ substitution into y image of rotation</p> <p>✓ subtraction of equations</p> <p>✓ value of cos <math>\theta</math></p> <p>✓ 180° + 15°</p> <p style="text-align: right;">(5)</p> <p>✓ substitution into x image of rotation</p> <p>✓ substitution into y image of rotation</p> <p>✓ addition of equations</p> <p>✓ value of sin <math>\theta</math></p> <p>✓ 180° + 15°</p> <p style="text-align: right;">(5)</p>
---	---

	<p style="text-align: center;"><b>OR</b></p> $-\frac{16}{\sqrt{2}} \cos(\theta) + \frac{16}{\sqrt{2}} \sin(\theta) = 8 \quad \dots(1)$ $\frac{16}{\sqrt{2}} \cos(\theta) + \frac{16}{\sqrt{2}} \sin(\theta) = -8\sqrt{3} \quad \dots(2)$ $(1) - (2): -\frac{32}{\sqrt{2}} \cos(\theta) = 8 + 8\sqrt{3}$ $\cos \theta = \frac{8 + 8\sqrt{3}}{32} = \frac{-\sqrt{6} - \sqrt{2}}{4} = -0,96592\dots$ $\theta = 180^\circ + 15^\circ \quad \text{or} \quad \theta = 180^\circ - 15^\circ$ $= 195^\circ$ <p style="text-align: center;"><b>OR</b></p> $\tan \alpha = \frac{-\frac{16}{\sqrt{2}}}{\frac{16}{\sqrt{2}}} = -1$ $\alpha = 135^\circ$ $\tan \beta = \frac{-8\sqrt{3}}{8} = -\sqrt{3}$ $\beta = -60^\circ$ $\therefore \theta = 135^\circ + 60^\circ = 195^\circ$ <p style="text-align: center;"><b>OR</b></p> $\tan \alpha = 1$ $\alpha = 45^\circ$ $\tan \beta = \sqrt{3}$ $\beta = 60^\circ$ $\therefore \theta = (180^\circ - 45^\circ) + 60^\circ = 195^\circ$	<ul style="list-style-type: none"> <li>✓ substitution into x image of rotation</li> <li>✓ substitution into y image of rotation</li> <li>✓ subtraction of equations</li> <li>✓ value of cos θ</li> <li>✓ 180° + 15°</li> </ul> <p style="text-align: right;">(5)</p> <ul style="list-style-type: none"> <li>✓ tan α = -1</li> <li>✓ 135°</li> <li>✓ tan β = -√3</li> <li>✓ -60°</li> <li>✓ 195°</li> </ul> <p style="text-align: right;">(5)</p> <ul style="list-style-type: none"> <li>✓ tan α = 1</li> <li>✓ 45°</li> <li>✓ tan β = √3</li> <li>✓ 60°</li> <li>✓ 195°</li> </ul> <p style="text-align: right;">(5)</p>
--	--	--



9.2	<p>195° in 1,3 secs</p> <p>∴ 1 revolution/<i>omwenteling</i> in <math>\frac{360}{195} \times 1,3</math> secs = 2,4 secs/<i>sek</i></p> <p>1 minute = 60 sec:</p> <p>∴ <math>\frac{60}{2,4} = 25</math> revolutions/<i>omwentelings</i></p> <p>∴ 25 rev/min or 25 <i>omw/min</i></p> <div style="border: 1px solid black; padding: 5px; width: fit-content; margin: 10px auto;">Answer only: 1 mark</div> <p style="text-align: center;">OR</p> <p>speed/sec = <math>\frac{195^\circ}{1,3} = 150^\circ / \text{sec}</math></p> <p>speed/minute = <math>150^\circ \times 60 = 9000^\circ / \text{min}</math></p> <p>no of revolutions = <math>\frac{9000}{360} = 25</math> rev/min</p>	<p>✓ <math>\frac{360}{195}</math></p> <p>✓ <math>\frac{360}{195} \times 1,3</math></p> <p>✓ 2,4 secs</p> <p>✓ <math>\frac{60}{2,4}</math></p> <p>✓ 25 rev/min (5)</p> <p>✓ <math>\frac{195}{1,3}</math> or 150</p> <p>✓ <math>150 \times 60</math></p> <p>✓ 9000</p> <p>✓ <math>\frac{9000}{360}</math></p> <p>✓ 25 rev/min (5)</p> <p style="text-align: right;"><b>[10]</b></p>
-----	--	--

**QUESTION/VRAAG 10**

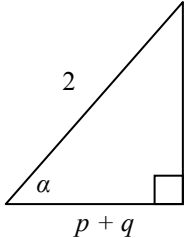
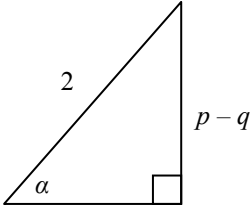
10.1	$OP^2 = 25 + 144 = 169$ $OP = 13$ $\cos \alpha = -\frac{5}{13}$ <p style="text-align: center;"><b>OR</b></p> $r^2 = x^2 + y^2$ $25 + 144 = 169$ $r = 13$ $\cos \alpha = -\frac{5}{13}$ <div style="border: 1px solid black; padding: 5px; width: fit-content; margin: 0 auto;">Answer only: full marks</div>	$\checkmark OP^2 = 25 + 144$ $\checkmark OP = 13$ $\checkmark \text{ answer}$ <p style="text-align: right;">(3)</p> $\checkmark r^2 = 25 + 144$ $\checkmark r = 13$ $\checkmark \text{ answer}$ <p style="text-align: right;">(3)</p>
10.2	$\tan(180^\circ - \alpha)$ $= -\tan \alpha$ $= -\frac{12}{5}$	$\checkmark -\tan \alpha$ $\checkmark \text{ answer}$ <p style="text-align: right;">(2)</p>
10.3	$\sin(30^\circ - \alpha)$ $= \sin 30^\circ \cos \alpha - \cos 30^\circ \sin \alpha$ $= \left(\frac{1}{2}\right)\left(\frac{-5}{13}\right) - \left(\frac{\sqrt{3}}{2}\right)\left(\frac{-12}{13}\right)$ $= \frac{-5 + 12\sqrt{3}}{26}$	$\checkmark \text{ expansion}$ $\checkmark \left(\frac{1}{2}\right)\left(\frac{-5}{13}\right)$ $\checkmark \left(\frac{\sqrt{3}}{2}\right)\left(\frac{-12}{13}\right)$ <p style="text-align: right;">(3) <b>[8]</b></p>



**QUESTION/VRAAG 11**

<p>11.1</p>	$LHS = \frac{\cos^2(90^\circ + \theta)}{\cos(-\theta) + \sin(90^\circ - \theta) \cdot \cos \theta}$ $= \frac{(-\sin \theta)^2}{\cos \theta + \cos \theta \cdot \cos \theta}$ $= \frac{1 - \cos^2 \theta}{\cos \theta + \cos^2 \theta}$ $= \frac{(1 - \cos \theta)(1 + \cos \theta)}{\cos \theta(1 + \cos \theta)}$ $= \frac{1 - \cos \theta}{\cos \theta}$ $= \frac{1}{\cos \theta} - 1$ $= RHS$	<p> <math>\checkmark \cos^2(90^\circ + \theta) = \sin^2 \theta</math>  <math>\checkmark \sin(90^\circ - \theta) = \cos \theta</math>  <math>\checkmark \cos(-\theta) = \cos \theta</math>  <math>\checkmark 1 - \cos^2 \theta</math>    <math>\checkmark</math> factors    <math>\checkmark \frac{1 - \cos \theta}{\cos \theta}</math> </p> <p style="text-align: right;">(6)</p>
<p>11.2</p>	<p> <math>\tan x \cdot \sin x + \cos x \cdot \tan x = 0</math>  <math>\tan x(\sin x + \cos x) = 0</math>  <math>\tan x = 0</math>                      <i>or</i>                      <math>\sin x + \cos x = 0</math>  <math>\sin x = -\cos x</math>  <math>\tan x = -1</math>  <math>x = 0^\circ + k \cdot 180^\circ; k \in Z</math>                      <math>x = 135^\circ + k \cdot 180^\circ; k \in Z</math> </p> <p style="text-align: center;"><b>OR</b></p> <p> <math>\frac{\sin x}{\cos x} \cdot \sin x + \cos x \cdot \frac{\sin x}{\cos x} = 0</math>  <math>\frac{\sin^2 x}{\cos x} + \frac{\cos x \cdot \sin x}{\cos x} = 0</math>  <math>\sin^2 x + \cos x \cdot \sin x = 0</math>  <math>\sin x(\sin x + \cos x) = 0</math>  <math>\sin x + \cos x = 0</math>  <math>\sin x = 0</math>    <i>or</i>    <math>\tan x = -1</math>  <math>x = 0^\circ + k \cdot 180^\circ; k \in Z</math>    <i>or</i>    <math>x = 135^\circ + k \cdot 180^\circ; k \in Z</math> </p> <div style="border: 1px solid black; padding: 5px; width: fit-content; margin: 10px auto;"> <p> <math>(\sin x + \cos x)^2 = 0</math>  <math>1 + \sin 2x = 0</math>  <math>\sin 2x = -1</math>    <math>\checkmark</math>  <math>x = 135^\circ + k \cdot 180^\circ</math> </p> </div> <p style="text-align: center;"><b>OR</b></p> <p> <math>\tan x \cdot \sin x + \cos x \cdot \tan x = 0</math>                      (<math>\cos x \neq 0</math>)  <math>\tan^2 x + \tan x = 0</math>  <math>\tan x(\tan x + 1) = 0</math>  <math>\tan x = 0</math>                      <i>or</i>                      <math>\tan x + 1 = 0</math>  <math>\tan x = -1</math>  <math>x = 0^\circ + k \cdot 180^\circ; k \in Z</math>    <i>or</i>    <math>x = 135^\circ + k \cdot 180^\circ; k \in Z</math> </p>	<p> <math>\checkmark</math> factorising  <math>\checkmark \tan x = 0</math> and <math>\sin x + \cos x = 0</math>    <math>\checkmark \tan x = -1</math>  <math>\checkmark x = 0^\circ</math>  <math>\checkmark x = 135^\circ</math> or <math>-45^\circ</math>  <math>\checkmark k \cdot 180^\circ</math>  <math>\checkmark k \in Z</math>                      (7) </p> <p> <math>\checkmark</math> factorising  <math>\checkmark \sin x = 0</math> and    <math>\checkmark \tan x = -1</math>  <math>\checkmark x = 0^\circ</math>  <math>\checkmark x = 135^\circ</math> or <math>-45^\circ</math>  <math>\checkmark k \cdot 180^\circ</math>  <math>\checkmark k \in Z</math>                      (7) </p> <p> <math>\checkmark</math> factorising  <math>\checkmark \tan x = 0</math> and <math>\tan x + 1 = 0</math>  <math>\checkmark \tan x = -1</math>  <math>\checkmark x = 0^\circ</math>  <math>\checkmark x = 135^\circ</math> or <math>-45^\circ</math>  <math>\checkmark k \cdot 180^\circ</math>  <math>\checkmark k \in Z</math>                      (7) </p>

<p>11.3.1</p>	$2 \sin^2 3x - \sin^2 x - \cos^2 x$ $= 2 \sin^2 3x - (\sin^2 x + \cos^2 x)$ $= 2 \sin^2 3x - 1$ $= -\cos 6x$ <p style="text-align: center;"><b>OR</b></p> $2 \sin^2 (2x + x) - \sin^2 x - \cos^2 x$ $= 2(\sin 2x \cdot \cos x + \cos 2x \cdot \sin x)^2 - (\sin^2 x + \cos^2 x)$ $= 2((2 \sin x \cdot \cos x) \cos x + (1 - 2 \sin^2 x) \sin x)^2 - 1$ $= 2(2 \sin x \cdot \cos^2 x + \sin x - 2 \sin^3 x)^2 - 1$ $= 2(2 \sin x(1 - \sin^2 x) + \sin x - 2 \sin^3 x)^2 - 1$ $= 2(2 \sin x - 2 \sin^3 x + \sin x - 2 \sin^3 x)^2 - 1$ $= 2(-4 \sin^3 x + 3 \sin x)^2 - 1$ $= 2(16 \sin^6 x - 24 \sin^4 x + 9 \sin^2 x) - 1$ $= 32 \sin^6 x - 48 \sin^4 x + 18 \sin^2 x - 1$	<p>✓ <math>-(\sin^2 x + \cos^2 x)</math>                  ✓ 1                  ✓ <math>2 \sin^2 3x - 1</math> (3)</p> <p>✓ <math>-(\sin^2 x + \cos^2 x)</math>                  ✓ 1</p> <p>✓ answer (3)</p>
<p>11.3.2</p>	<p>Max value = 1</p>	<p>✓ 1 (1)</p>
<p>11.4.1 (a)</p>	$p = \cos \alpha + \sin \alpha$ $q = \cos \alpha - \sin \alpha$ $\cos 2\alpha = \cos^2 \alpha - \sin^2 \alpha$ $= (\cos \alpha + \sin \alpha)(\cos \alpha - \sin \alpha)$ $= pq$ <p style="text-align: center;"><b>OR</b></p> $\sin \alpha = \frac{p - q}{2}$ $\cos 2\alpha = 1 - 2 \sin^2 \alpha$ $= 1 - 2\left(\frac{p - q}{2}\right)^2$ <p style="text-align: center;"><b>OR</b></p> $\cos \alpha = \frac{p + q}{2}$ $\cos 2\alpha = 2 \cos^2 \alpha - 1$ $= 2\left(\frac{p + q}{2}\right)^2 - 1$ <p style="text-align: center;"><b>OR</b></p> $\cos 2\alpha = \cos^2 \alpha - \sin^2 \alpha$ $= \left(\frac{p + q}{2}\right)^2 - \left(\frac{p - q}{2}\right)^2$	<p>✓ expansion                  ✓ factorise                  ✓ answer (3)</p> <p>✓ <math>\frac{p - q}{2}</math>                  ✓ expansion                  ✓ answer (3)</p> <p>✓ <math>\frac{p + q}{2}</math>                  ✓ expansion                  ✓ answer (3)</p>

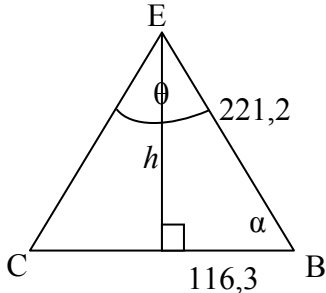
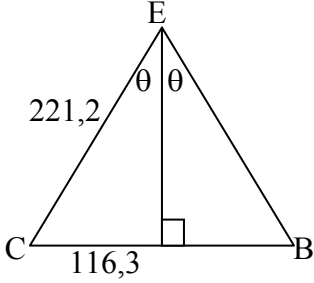
		✓ expansion ✓ $\frac{p-q}{2}$ ✓ $\frac{p+q}{2}$ (3)
11.4.1 (b)	$p + q = 2 \cos \alpha \quad \therefore \cos \alpha = \frac{p + q}{2}$ $p - q = 2 \sin \alpha \quad \therefore \sin \alpha = \frac{p - q}{2}$ $\tan \alpha = \frac{\sin \alpha}{\cos \alpha}$ $= \frac{2 \sin \alpha}{2 \cos \alpha}$ $= \frac{p - q}{p + q}$ <p style="text-align: center;"><b>OR</b></p> $\cos \alpha + \sin \alpha = p$ $\cos \alpha - \sin \alpha = q$ $\Rightarrow 2 \cos \alpha = p + q$ $\cos \alpha = \frac{p + q}{2}$ $y^2 = 2^2 - (p + q)^2$ $y = \sqrt{4 - (p + q)^2}$ $\therefore \tan \alpha = \frac{\sqrt{4 - (p + q)^2}}{p + q}$ <p style="text-align: center;"><b>OR</b></p> $\cos \alpha + \sin \alpha = p$ $\cos \alpha - \sin \alpha = q$ $\Rightarrow 2 \sin \alpha = p - q$ $\sin \alpha = \frac{p - q}{2}$ $x^2 = 2^2 - (p - q)^2$ $x = \sqrt{4 - (p - q)^2}$ $\therefore \tan \alpha = \frac{p - q}{\sqrt{4 - (p - q)^2}}$ <p style="text-align: center;"><b>OR</b></p>	✓ $p + q$ ✓ $p - q$  ✓ identity  ✓ answer (4)
		✓ $2 \cos \alpha = p + q$ ✓ sketch ✓ $y = \sqrt{4 - (p + q)^2}$ ✓ answer (4)
		✓ $2 \sin \alpha = p - q$ ✓ sketch ✓ $x = \sqrt{4 - (p - q)^2}$ ✓ answer (4)

	$\cos 2\alpha = 1 - 2 \sin^2 \alpha$ $\sin^2 \alpha = \frac{1 - pq}{2}$ $\cos 2\alpha = 2 \cos^2 \alpha - 1$ $\cos^2 \alpha = \frac{pq + 1}{2}$ $(\tan \alpha)^2 = \left( \frac{\sin \alpha}{\cos \alpha} \right)^2$ $\tan^2 \alpha = \frac{1 - pq}{1 + pq}$ $\therefore \tan \alpha = \sqrt{\frac{1 - pq}{1 + pq}}$	$\checkmark \sin^2 \alpha = \frac{1 - pq}{2}$ $\checkmark \cos^2 \alpha = \frac{pq + 1}{2}$ $\checkmark (\tan \alpha)^2 = \left( \frac{\sin \alpha}{\cos \alpha} \right)^2$ $\checkmark \tan \alpha = \sqrt{\frac{1 - pq}{1 + pq}}$ <p style="text-align: right;">(4)</p>
<p>11.4.2</p>	$\frac{p}{2q} - \frac{q}{2p}$ $= \frac{p^2 - q^2}{2pq}$ $= \frac{(p + q)(p - q)}{2pq}$ $= \frac{(2 \cos \alpha)(2 \sin \alpha)}{2 \cos 2\alpha}$ $= \frac{4 \sin \alpha \cos \alpha}{2 \cos 2\alpha}$ $= \frac{2 \sin 2\alpha}{2 \cos 2\alpha}$ $= \tan 2\alpha$ <p style="text-align: center;"><b>OR</b></p> $\frac{p}{2q} - \frac{q}{2p}$ $= \frac{\cos \alpha + \sin \alpha}{2(\cos \alpha - \sin \alpha)} - \frac{\cos \alpha - \sin \alpha}{2(\cos \alpha + \sin \alpha)}$ $= \frac{(\cos \alpha + \sin \alpha)^2 - (\cos \alpha - \sin \alpha)^2}{2(\cos \alpha - \sin \alpha)(\cos \alpha + \sin \alpha)}$ $= \frac{\cos^2 \alpha + 2 \sin \alpha \cos \alpha + \sin^2 \alpha - (\cos^2 \alpha - 2 \sin \alpha \cos \alpha + \sin^2 \alpha)}{2(\cos^2 \alpha - \sin^2 \alpha)}$ $= \frac{4 \sin \alpha \cos \alpha}{2 \cos 2\alpha}$ $= \frac{2 \sin 2\alpha}{2 \cos 2\alpha}$ $= \tan 2\alpha$	$\checkmark \frac{p^2 - q^2}{2pq}$ $\checkmark \text{factorising}$ $\checkmark \text{substituting}$ $\checkmark \text{from 11.4.1(a)}$ $\checkmark \text{and 11.4.1(b)}$ $\checkmark 2 \sin 2\alpha$ $\checkmark \tan 2\alpha$ <p style="text-align: right;">(6)</p> $\checkmark \text{substitution}$ $\checkmark \text{single fraction}$ $\checkmark 4 \sin \alpha \cos \alpha$ $\checkmark 2 \cos 2\alpha$ $\checkmark 2 \sin 2\alpha$ $\checkmark \tan 2\alpha$ <p style="text-align: right;">(6)</p> <p style="text-align: right;"><b>[30]</b></p>

**QUESTION/VRAAG 12**

<p>12.1</p>		<p><math>y = \tan x + 1</math></p> <ul style="list-style-type: none"> <li>✓ asymptotes and shape for whole domain</li> <li>✓ y intercept</li> <li>✓ x intercepts</li> </ul> <p><math>y = \cos 2x</math></p> <ul style="list-style-type: none"> <li>✓ x intercepts</li> <li>✓ y intercept/TP</li> <li>✓ minimum values</li> </ul> <p>(6)</p>
<p>12.2</p>	<p>Period of <math>g</math> is <math>180^\circ</math>.</p>	<ul style="list-style-type: none"> <li>✓ <math>180^\circ</math></li> </ul> <p>(1)</p>
<p>12.3</p>	<p>Reflected about the <math>x</math>-axis and then translated by <math>10^\circ</math> to the left/ <i>refleksie om die <math>x</math>-as en dan 'n translasie van <math>10^\circ</math> links.</i></p> <p style="text-align: center;"><b>OR</b></p> <p>Translated by <math>10^\circ</math> to the left and then reflected about the <math>x</math>-axis/ <i>Translasie van <math>10^\circ</math> links en dan 'n refleksie om die <math>x</math>-as.</i></p>	<ul style="list-style-type: none"> <li>✓ reflected about <math>x</math>-axis/<i>refleksie om <math>x</math>-as</i></li> <li>✓ <math>10^\circ</math> to the left <i><math>10^\circ</math> na links</i></li> </ul> <p>(2)</p> <ul style="list-style-type: none"> <li>✓ <math>10^\circ</math> to the left <i><math>10^\circ</math> na links</i></li> <li>✓ reflected about <math>x</math>-axis/<i>refleksie om <math>x</math>-as</i></li> </ul> <p>(2)</p>
<p>12.4</p>	<p><math>f</math> is always increasing <math>\therefore f'(x) &gt; 0</math> always <math>\therefore g(x) &gt; 0</math></p> <p><math>\therefore 0^\circ &lt; x &lt; 45^\circ</math> or <math>135^\circ &lt; x \leq 180^\circ</math></p> <p style="text-align: center;"><b>OR</b></p> <p><math>\therefore x \in (0^\circ; 45^\circ)</math> or <math>(135^\circ; 180^\circ]</math></p>	<ul style="list-style-type: none"> <li>✓ critical values <math>0^\circ</math> and <math>45^\circ</math></li> <li>✓ inequality</li> <li>✓ critical values <math>135^\circ</math> and <math>180^\circ</math></li> <li>✓ inequality</li> </ul> <p>(4)</p> <p><b>[13]</b></p>

**QUESTION/VRAAG 13**

<p>13.1</p>	<p>In <math>\triangle CEB</math>:</p> $BC^2 = EC^2 + EB^2 - 2(EC)(EB)\cos\hat{C}EB$ $(232,6)^2 = (221,2)^2 + (221,2)^2 - 2(221,2)(221,2)\cos\hat{C}EB$ $\cos\hat{C}EB = \frac{2(221,2)^2 - (232,6)^2}{2(221,2)^2}$ $= 0,447\dots$ $\hat{C}EB = 63,44^\circ$ <p style="text-align: center;"><b>OR</b></p> $\cos\alpha = \frac{116,3}{221,2}$ $\alpha = 58,28^\circ$ $\theta = 180^\circ - 2(58,28^\circ) = 63,44^\circ$  <p style="text-align: center;"><b>OR</b></p> $\sin\theta = \frac{116,3}{221,2}$ $\theta = 31,72^\circ$ $\hat{A}EB = 2\theta = 2(31,72^\circ) = 63,44^\circ$ 	<p>✓ substitution into correct formula</p> <p>✓ 0,447....</p> <p>✓ 63,44°</p> <p style="text-align: right;">(3)</p> <p>✓ substitution into correct definition</p> <p>✓ <math>\alpha = 58,28^\circ</math></p> <p>✓ 63,44°</p> <p style="text-align: right;">(3)</p> <p>✓ substitution into correct formula</p> <p>✓ <math>\theta = 31,72^\circ</math></p> <p>✓ 63,44°</p> <p style="text-align: right;">(3)</p>
<p>13.2</p>	$EF^2 = EB^2 - BF^2$ $= (221,2)^2 - (116,3)^2$ $= 35403,75$ $EF = 188,16\text{ m}$ $\cos\hat{E}FG = \frac{GF}{EF}$ $= \frac{116,3}{188,16}$ $= 0,618\dots$ $\hat{E}FG = 51,82^\circ$ <p style="text-align: center;"><b>OR</b></p>	<p>✓ using Pythagoras correctly</p> <p>✓ <math>BF = 116,3</math></p> <p>✓ 188,16</p> <p>✓ using <math>\cos\hat{E}FG</math></p> <p>✓ <math>\frac{116,3}{188,16}</math></p> <p>✓ 51,82°</p> <p style="text-align: right;">(6)</p>

$$\sin \alpha = \frac{h}{221,2}$$

$$h = 221,2 \sin 58,28^\circ$$

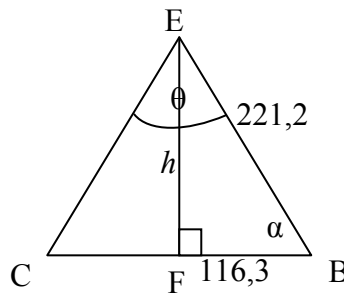
$$= 188,158\dots$$

In  $\triangle EFG$ :

$$\cos \hat{EFG} = \frac{116,3}{188,158\dots}$$

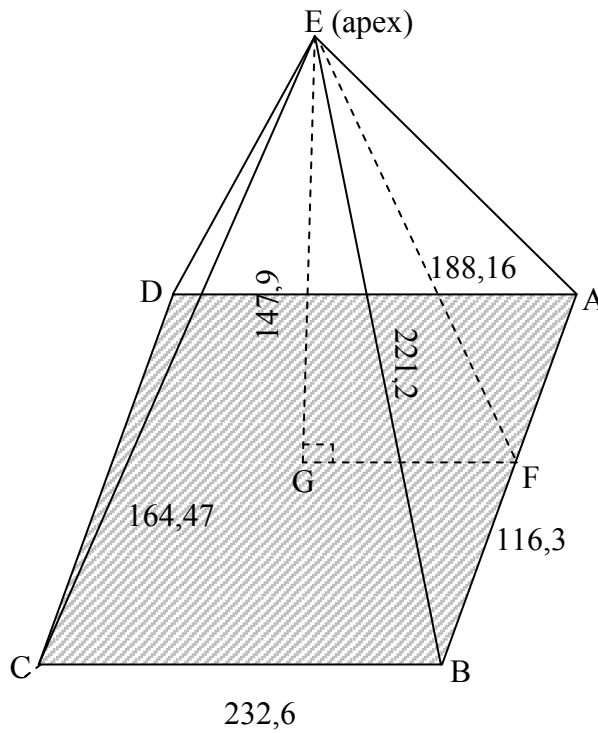
$$= 0,61809\dots$$

$$\hat{EFG} = 51,82^\circ$$



- ✓  $\sin \alpha = \frac{h}{221,2}$
- ✓  $h$  subject
- ✓  $h = 188,158\dots$
- ✓ using  $\cos \hat{EFG}$
- ✓  $\frac{116,3}{188,16}$
- ✓  $51,82^\circ$

(6)



[9]

**TOTAL/TOTAAL: 150**