



# basic education

Department:  
Basic Education  
REPUBLIC OF SOUTH AFRICA

AMAMA KSI

## UKUHLOLWA KWELIZWE LOKE KOMNYAKA 2013 IGREYIDI 1 IIMBALO - ISINDEBELE UKUHLOWA

AMAMA KSI: 20

ISIKHATHI: I-RI LI- 1

IPHROVINSI \_\_\_\_\_

IDISTRIKTHI \_\_\_\_\_

ISIYINGI \_\_\_\_\_

IGAMA LESIKOLO \_\_\_\_\_

INOMBORO YE - EMIS (amadijithi ali-9)

--	--	--	--	--	--	--	--	--

ITLASI (Isib. 1A) \_\_\_\_\_

ISIBONGO \_\_\_\_\_

IGAMA \_\_\_\_\_

UBULILI (✓)

UMSANA

UMNTAZANA

ILANGA LAMABELETHO

C	C	Y	Y	M	M	D	D
---	---	---	---	---	---	---	---

Ukuhlolwa lokhu kunamakhasi ali-7 ngaphandle kwephepha lekhavara.

## Iinlayelo zakatitj here

1. Fundela abafundi umbuzo ngamunye buthaka ufunde kuzwakale.
2. Funda umbuzo kabili, abafundi bona bakulandele ngokuqala encwaj aneni zabo.
3. Banikele isikhathi sokutlola iimpendulo ngokwabo, eenkhaleni ezinikelweko.
4. Lokha nasele baqedile ragela phambili ngokufunda umbuzo olandelako.
5. Landela ikambiso leyo ukufikela embuzweni wokugcina.
6. Ukusebenzisa isibalisesi akukavunyelwa.
7. Ukuhlolwa kunamamaksi ama-20.
8. Isikhathi sokuhlolwa simizuzu ema-60.
9. Yenza umsebenzi wokuzij ayeza nabafundi.

## Umsebenzi wokuzij ayeza

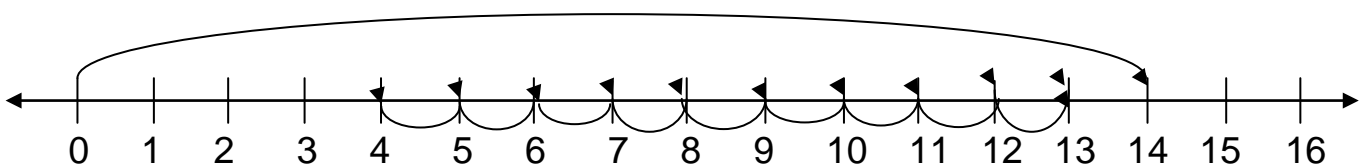
$13 - 9 = 4$  ngokusebenzisa indlela yeembalo zehloko

nofana

Ipendulo: ngokusebenzisa iinthombe

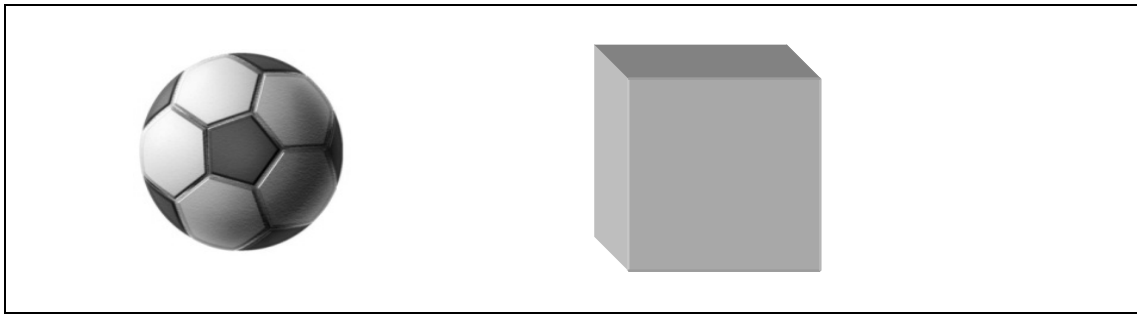


Ipendulo: ngokusebenzisa inambalayini.

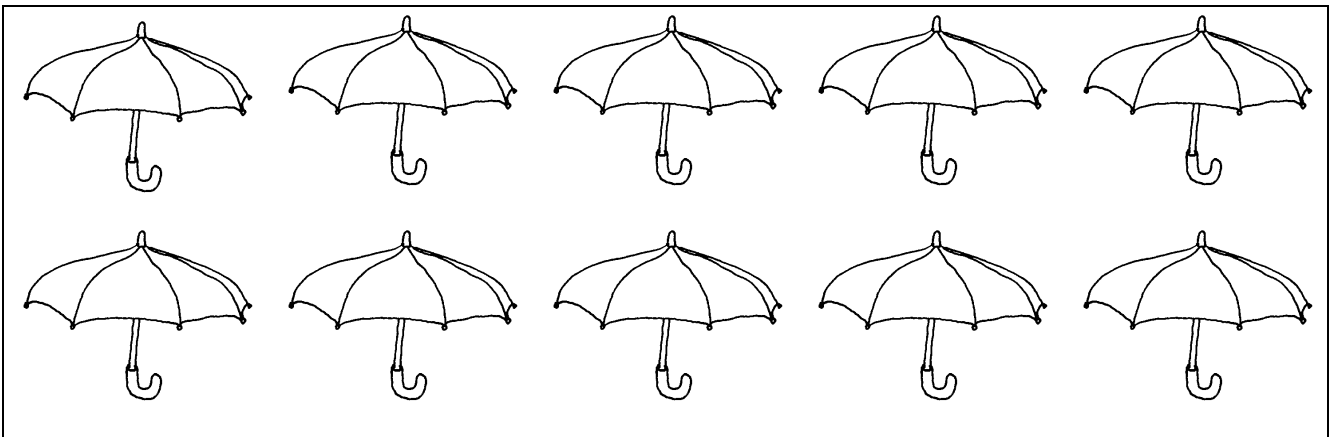


Ukuhlolwa kuthoma ekhasini elilandelako.

1. Gwala itshwayo (x) entweni etj helelako.



2. Bala inani lezambreli eliseenthombeni bese utlola itshwayo lenomboro negama lenomboro.



2.1 Tlola itshwayo lenomboro \_\_\_\_\_

2.2 Tlola igama lenomboro \_\_\_\_\_

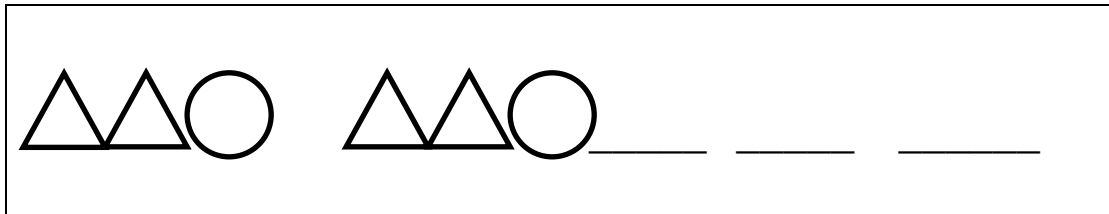
3. Zalisa iinomboro ezitj hodako:

20	30			60		80
----	----	--	--	----	--	----

4. Zalisa ipendulo:

$$12 - 3 = \square$$


5. Gwala amabumbeko amathathu ukuqedelela iphetheni.



6. Qedelela iphetheni yeenomboro:

2; 12; \_\_\_\_\_; 32; 42; 52

7. I tsikiri yinye inamavili ama-2. I tj ho bona iintsikiri ezi-7 zinamavili amangaki?



8. Tlola iinomboro ezilandelako ukusuka kencani khulu ukuya kekulu khulu.

12                      9                      3                      7                      15  
\_\_\_\_\_

9. Lezi ziinyanga zomnyaka:  
uTj hirhweni, uMhlolanj a, uNtaka, uSihlabantangana,  
uMrhayili, uMgwengweni, uVelabahlinze, uRhoboyi,  
uKhukhulamungu, uSewula, uSinyikhaba, uNobayeni.

Ngiyiphi inyanga yesithathu elandela uMrhayili?

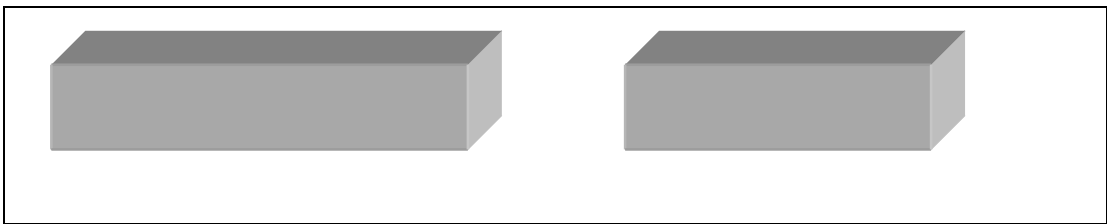
\_\_\_\_\_

10. Yabela abantwana aba-3 amakuke ali-9 ngokulinganako.



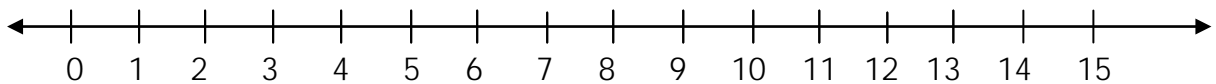
Umngani ngamunye uthola \_\_\_\_\_ yamakuke.

11. Gwala itshwayo (x) phezulu kwento ede khulu.



12. Sebenzisa inambalayini ukutj engisa bonyana uzokubalisisa

bunj ani  $4 + 2 + 2$ .




13. I hafu ye-12 = \_\_\_\_\_

14. Gwala iinthombe ukurarulula isibalo sendatj ana.


ULerato unamalolipopi ali - 11, uJohn unamalolipopi ama-5.

UJohn unamalolipopi amancani ngamangaki kunoLerato?



UJohn unamalolipopi amancani kunoLerato nga \_\_\_\_\_

15. U-Eva uthenga ibholo nge R5,00 namahabhula ama-2 nge R2,00 ngalinye. Ubhadela nge R10,00 yephepha.




15.1 Usebenzise malini nasele iyoke?

R\_\_\_\_\_,\_\_\_\_\_

15.2 Kufanele athole itj hentj hi yamalini?











R\_\_\_\_\_,\_\_\_\_\_

16. Thala umuda utj engise isimethri.



17. Qala igrafu engenzasi bese uphendula umbuzo.

Iinkoloyi ezibuthelelwe bafundi abane beGreyidi 1

Inani leenkoloyi	5				
	4				
	3				
	2				
	1				
	uJack	uThandi	uPeter	uNorah	

uThandi ubuthelele iinkoloyi ezinengi ngazingaki kuno Peter?

\_\_\_\_\_

Inani: 20