



basic education

Department:
Basic Education
REPUBLIC OF SOUTH AFRICA

TIMARAKA

XIKAMBELO XA TIKO XA LEMBE NA LEMBE 2013 GIREDI 1 MATEMATIKI - XITSONGA XIKAMBELO

TIMARAKA: 20

NKARHI: AWARA YIN'WE

XIFUNDZHANKULU _____

RHIJINI _____

XIFUNDZHANTSONGO _____

VITO RA XIKOLO _____

NOMBORO YA EMISI (9 wa tidijiti)

--	--	--	--	--	--	--	--	--

TLILASI (xik. 1A) _____

XIVONGO _____

VITO _____

RIMBEWU(✓)

MUFANA

NHWANYANA

SIKU RO VELEKIWA

C	C	Y	Y	M	M	D	D
---	---	---	---	---	---	---	---

Xikambelo lexi na tipheji ta 6 leti nga katsiki pheji leri.

Swiletelo swa mudyondzisi

1. Hlaya swivutiso hi ku nonoka hi rito ro twala.
2. Hlaya xivutiso kambirhi loko vadyondzi va karhi va landzelela eswibukwanini swa vona.
3. Va nyike nkarhi wo hlamula swivutiso eka swibukwana leswi va nyikiweke..
4. Loko va hetile hlaya xivutiso lexi landzelaka.
5. Landzelela maendlelo lama ku fika eka xivutiso xo hetelela.
6. Ku tirhisa tikhalikhuleta a swi pfumeleriwi.
7. Xikambelo xi na timaraka ta 20.
8. Nkarhi lowu pimiweke ku tsala xikambelo i 60 wa timinete.
9. Endla xitoloveto ku sungula na vadyondzi.

Switoloveto

$13 - 9 = 4$ tirhisa menthele wa ximatematiki

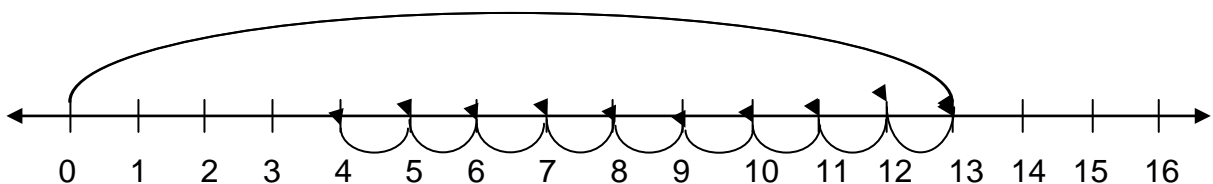
kumbe

nhlamulo: hi ku tirhisa swifaniso



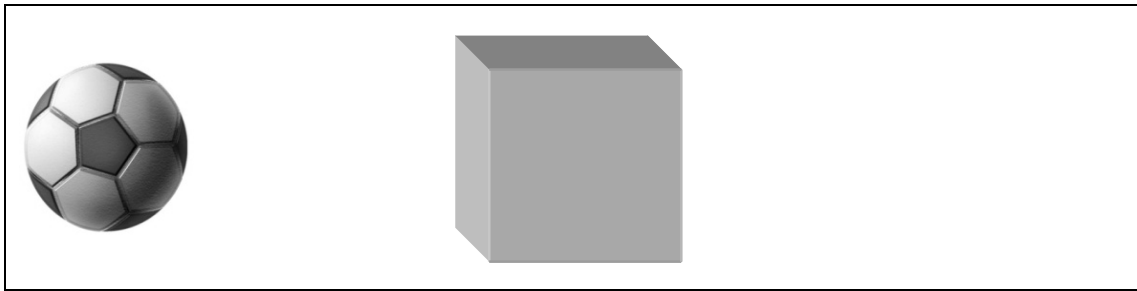
kumbe

nhlamulo: tirhisa ndzhati wa mintsengo.

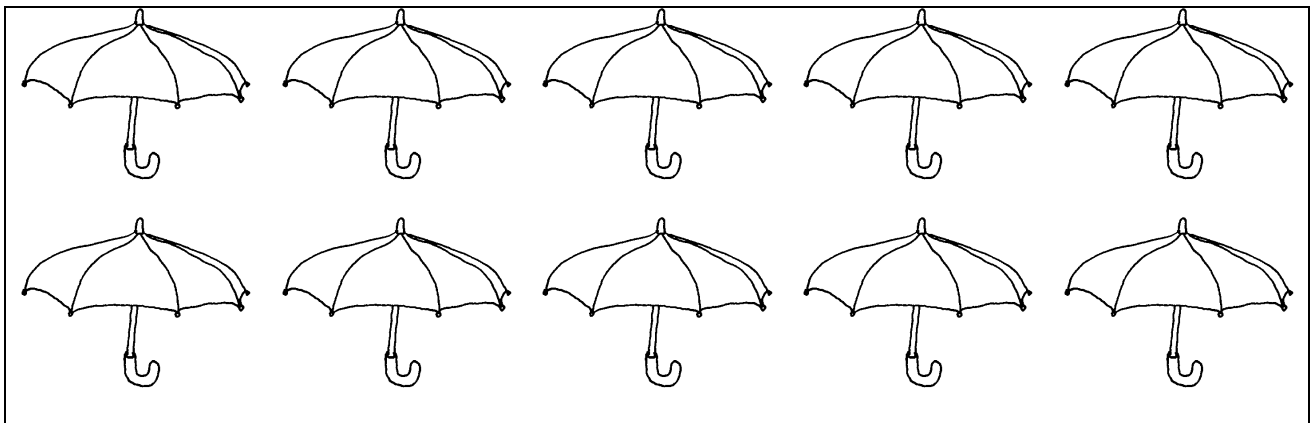


Xikambelo xi sungula eka phej i leri landzelaka.

1. Tsala (x) eka xivumbeko lexi khungulukaka.



2. Hlayela ntsengo wa swambulela kutani u tsala mfungho na vito ra nomboro.



2.1 Mfungho wa nomboro i _____

2.2 Vito ra nomboro i _____

3. Tatisa tinomboro leti kayivelaka:

20	30			60		80
----	----	--	--	----	--	----

4. Tatisa nhlamulo:

$$12 - 3 = \square$$

5. Dirowa swivumbeko swinharhu ku hetisa patironi ya swivumbeko.



6. Hetisa patironi ya tinomboro:

2; 12; _____; 32; 42; 52

7. Basikiri yin'we yin a mavhilwa mambirhi. Xana tibasikiri ta 7 ti na mavhilwa mangani?

Tibasikiri ta 7 ti na mavhilwa ma _____.

8. Xaxameta tinomboro leti ku suka eka leyintsongo ngopfu ku fika eka leyikulu ngopfu.

12 9 3 7 15

9. Leti i tin'hweti ta lembe:

Sunguti, Nyenyenyani, Nyenyankulu, Dzivamisoko, Mudyaxihi, Khotavuxika, Mawuwani, Mhawuri, Ndzhati, Nhlangua, Hukuri, N'wendzambahala.

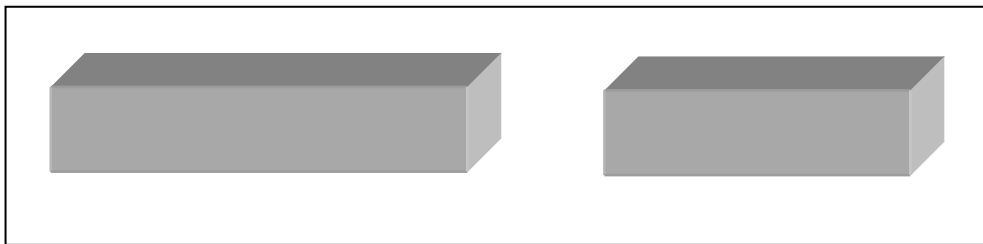
I n'hweti yihl ya vunharhu leyi taka endzhaku ka n'hweti ya Mudyaxihi?

10. Ava 9 wa makhekhe eka vanghana va3.

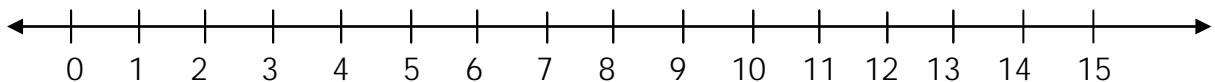


Un'wana na un'wana u ta kuma _____ wa makhekhe.

11. Tsala (x) ehenhla ka xivumbeko xo leha.



12. Tirhisa ndzhati wa mintsengo ku kuma nhlamulo. $4 + 2 + 2$.




13. Hafu ya 12 = _____

14. Dirowa swifaniso ku kuma ntsengo wa xitori.

Nyiko u na 11 wa tiloliphopho, Jamela u na 5 wa tiloliphopho. I nhlayo muni leyintsongo Jamela a nga na yona ya tiloliphopho eka ya Nyiko?

Jamela u na _____ wa tiloliphopho leyi nga nhlayo leyi ntsongo eka Nyiko.

15. Engetani u xava bolo hi R5,00 na maapula ma 2 hi R2,00 rin'we. U hakela hi R10,00 ya phepha.




15.1 Xana u tirhisile mali muni ku xava hinkwaswo?

R_____

15.2 Xana u ta vuyela hi cinci ya mali muni?











R_____

16. Dirowa ntila wa ndzinganiso.



17. Languta girafu leyi landzelaka kutani u hlamula swivutiso.

Vana va mune va ka giredi 1 va hlengeletile mimovha

Nomboro ya mimovha	5				
	4				
	3				
	2				
	1				
	Musa	Mixo	Ntila	Ntwalo	

I mimovha mingani leyi Mixo a nga yi hlengeleta ku tlula Ntila? _____

Ntsengo: 20