



basic education

Department:
Basic Education
REPUBLIC OF SOUTH AFRICA

NASIONALE SENIOR SERTIFIKAAT

GRAAD 12

WISKUNDE V2

FEBRUARIE/MAART 2013

MEMORANDUM

PUNTE: 150

Hierdie memorandum bestaan uit 21 bladsye.

NOTA:

- Indien `n kandidaat `n vraag TWEE keer beantwoord het, merk slegs die EERSTE poging.
- Indien `n kandidaat `n poging om `n vraag te beantwoord gekanselleer het en die vraag nie weer gedoen het nie, merk die gekanselleerde poging.
- Konstante akkuraatheid is van toepassing in **ALLE** aspekte van die merk memorandum.

VRAAG 1

<p>1.1</p>	<p style="text-align: center;">Spreidiagram van wisselkoers versus olieprys</p> <table border="1" style="display: none;"> <caption>Data points from the scatter plot</caption> <thead> <tr> <th>Wisselkoers (in R/\$)</th> <th>Olieprys (in \$)</th> </tr> </thead> <tbody> <tr><td>6.8</td><td>81</td></tr> <tr><td>6.9</td><td>76</td></tr> <tr><td>7.0</td><td>73.5</td></tr> <tr><td>7.1</td><td>71.2</td></tr> <tr><td>7.2</td><td>72.8</td></tr> <tr><td>7.3</td><td>68.2</td></tr> <tr><td>7.4</td><td>70.2</td></tr> <tr><td>7.5</td><td>69.8</td></tr> <tr><td>7.6</td><td>67.8</td></tr> <tr><td>7.7</td><td>68</td></tr> <tr><td>7.7</td><td>67</td></tr> <tr><td>7.7</td><td>66.2</td></tr> </tbody> </table>	Wisselkoers (in R/\$)	Olieprys (in \$)	6.8	81	6.9	76	7.0	73.5	7.1	71.2	7.2	72.8	7.3	68.2	7.4	70.2	7.5	69.8	7.6	67.8	7.7	68	7.7	67	7.7	66.2	<p>✓ enige 4 punte korrek geplot ✓ enige 9 punte korrek geplot ✓ alle punte korrek geplot</p> <p style="text-align: right;">(3)</p>
Wisselkoers (in R/\$)	Olieprys (in \$)																											
6.8	81																											
6.9	76																											
7.0	73.5																											
7.1	71.2																											
7.2	72.8																											
7.3	68.2																											
7.4	70.2																											
7.5	69.8																											
7.6	67.8																											
7.7	68																											
7.7	67																											
7.7	66.2																											
<p>1.2</p>	<p>Soos die wisselkoers (R/\$) vermeerder verminder die olieprys (\$). OF Daar is `n negatiewe korrelasie tussen die wisselkoers en die olieprys.</p>	<p>✓✓ rede (2)</p>																										
<p>1.3</p>	<p>Gemiddelde = $\frac{852,6}{12}$ = 71,05</p>	<p>✓ 852,6 ✓ 71,05 (2)</p>																										
<p>1.4</p>	<p>Standaard afwyking is: $\sigma = 4,09$</p>	<p>✓✓ 4,09 (2)</p>																										
<p>1.5</p>	<p>2 standaard afwykings van die gemiddelde gemiddelde = $71,05 + 2(4,09) = 79,23$ Die publiek sal besorg wees in Desember 2010</p>	<p>✓ 79,23 ✓ Des 2010 (2) [11]</p>																										

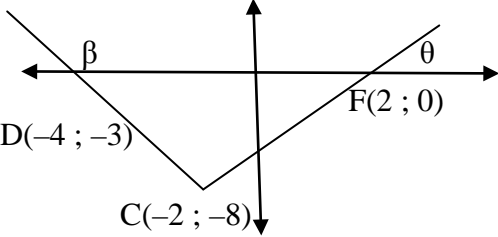
VRAAG 2

2.1	Variasiewydte van Peter se punte is $94 - 68 = 26$	✓ $94 - 68$ ✓ 26 (2)
2.2	Vuyani se minimum punte is 76	✓ 76 (1)
2.3	Vuyani was meer konstant gedurende die jaar want die variasiewydte van sy punte is nader om die mediaan waarde gerangskik OF die variasiewydte en die interkwartiel-wydte is kleiner as Peters.	✓ Vuyani ✓ rede (2) [5]

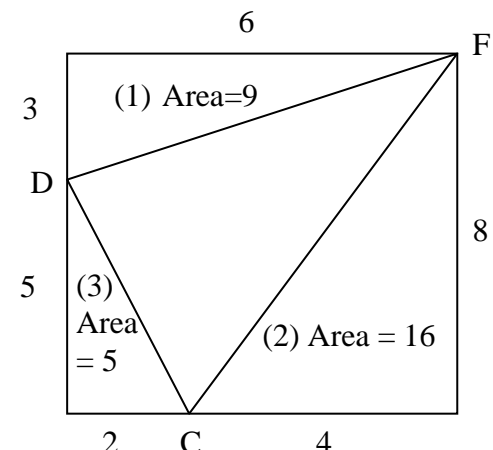
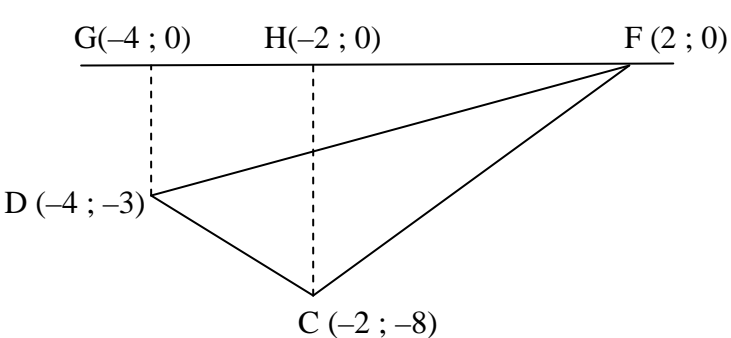
VRAAG 3

3.1	<p style="text-align: center;">Kumulatiewefrekwensie-grafiek</p>	✓ plot punte by kummulatiewe frekwensie ✓ plot teen boonste limiet ✓ gegrond by (0 ; 0) ✓ gladde kurwe (4)
3.2.1	(85 ; ± 144) ± 144 leerdere het punte onder 85% (Aanvaar: 144 to 146)	✓ (85 ; ± 144) ✓ ± 144 leerdere (2)
3.2.2	$Q_1 = 25$ of 27 or 26 $Q_3 = 61$ of 62 or 64 Interkwartiel-wydte = 36 of 35 or 38	✓ onderste kwartiel ✓ boonste kwartiel ✓ IKW (3) [9]

VRAAG 4

<p>4.1</p>	$m_{AD} = \frac{y_2 - y_1}{x_2 - x_1}$ $= \frac{7 - (-3)}{1 - (-4)}$ $= 2$	<p>✓ substitusie</p> <p>✓ 2</p> <p>(2)</p>
<p>4.2</p>	<p>AD//BC</p> $m_{AD} = m_{BC} = 2$ $y - y_1 = m(x - x_1)$ $y - (-8) = 2(x - (-2))$ $\therefore y = 2x - 4$	<p>✓ $m_{AD} = 2$</p> <p>✓ stel in formule</p> <p>✓ $y = 2x - 4$</p> <p>(3)</p>
<p>4.3</p>	<p>By F: $y = 0$</p> $0 = 2x - 4$ $x = 2$ <p>F(2 ; 0)</p>	<p>✓ $y = 0$</p> <p>✓ $x = 2$</p> <p>(2)</p>
<p>4.4</p>	<p>D is getransleer C volgens die reël: $D(x; y) \rightarrow C(x + 2 ; y - 5)$ A moet ook getransleer word volgens die reël na B'.</p> $\therefore A(1 ; 7) \rightarrow B'(3 ; 2)$ <p style="text-align: center;">OF</p> $x_{B'} = -2 + (1 + 4) = 3$ $y_{B'} = -8 + (7 + 3) = 5$	<p>✓ $x = 3$</p> <p>✓ $y = 2$</p> <p>(2)</p> <p>✓ $x = 3$</p> <p>✓ $y = 2$</p> <p>(2)</p>
<p>4.5</p>	$m_{BC} = 2$ $\tan \theta = 2$ $\theta = 63,43^\circ$ $m_{DC} = \frac{-8 - (-3)}{-2 - (-4)} = -\frac{5}{2}$ $\tan \beta = -\frac{5}{2}$ $\beta = 180^\circ - 68,20^\circ = 111,80^\circ$ $\alpha = 111,80^\circ - 63,43^\circ = 48,37^\circ$ <div style="text-align: center;">  </div> <p style="text-align: center;">OF</p>	<p>✓ $63,43^\circ$</p> <p>✓ $\tan \beta = -\frac{5}{2}$</p> <p>✓ $111,8^\circ$</p> <p>✓ $48,37^\circ$</p> <p>(4)</p>

	$DC = \sqrt{(-4+2)^2 + (-3+8)^2}$ $= \sqrt{29}$ $CF = \sqrt{(-2-2)^2 + (-8-0)^2}$ $= \sqrt{80}$ $DF = \sqrt{(2+4)^2 + (0+3)^2}$ $= \sqrt{45}$ $\cos \alpha = \frac{29 + 80 - 45}{2(\sqrt{29})(\sqrt{80})}$ $= 0,6643\dots$ $\alpha = 48,37^\circ$ <p style="text-align: center;">OF</p> $DC = \sqrt{(-4+2)^2 + (-3+8)^2}$ $= \sqrt{29}$ $DB = \sqrt{(3+4)^2 + (2+3)^2}$ $= \sqrt{74}$ $BC = \sqrt{(3+2)^2 + (2+8)^2}$ $= \sqrt{125}$ $\cos \alpha = \frac{29 + 125 - 74}{2(\sqrt{29})(\sqrt{125})}$ $= 0,6643\dots$ $\alpha = 48,37^\circ$	<p>✓ Subst in cos- formule ✓ cos α onderwerp ✓ 0,6643... ✓ 48,37°</p> <p style="text-align: right;">(4)</p> <p>✓ Subst in cos- formule ✓ cos α onderwerp ✓ 0,6643... ✓ 48,37°</p> <p style="text-align: right;">(4)</p>
<p>4.6</p>	$DC = \sqrt{(-4+2)^2 + (-3+8)^2}$ $= \sqrt{29}$ $CF = \sqrt{(-2-2)^2 + (-8-0)^2}$ $= \sqrt{80}$ $Area \Delta DCF = \frac{1}{2} \cdot DC \cdot CF \cdot \sin \alpha$ $= \frac{1}{2} (\sqrt{29})(\sqrt{80}) \sin 48,37^\circ$ $= 18 \text{ eenhede}^2$	<p>✓ substitusie in formule ✓ $\sqrt{29}$ ✓ substitusie in formule ✓ $\sqrt{80}$</p> <p>✓ substitusie In die area reël ✓ 18</p> <p style="text-align: right;">(6)</p>

	<p>OF</p>  <p>Area $\triangle DCF$ = Area van reghoek – (1) – (2) – (3) $= 48 - 9 - 5 - 16$ $= 18$ vierkante eenheid</p>	<p>✓ reghoek en area</p> <p>✓ verband tussen areas</p> <p>✓ (1) = 9</p> <p>✓ (2) = 16</p> <p>✓ (3) = 5</p> <p>✓ 18 eenhede² (6)</p>
	<p>OF</p>  <p>Area CDF = Area CHF + Area $CDGH$ - Area DGF $= \frac{1}{2} \times 4 \times 8 + 2 \times \frac{1}{2} (3 \times 8) - \frac{1}{2} \times 6 \times 3$ $= 16 + 11 - 9$ $= 18$ vierkante eenheid</p>	<p>✓ teken loodregte lyne</p> <p>✓ verband tussen areas</p> <p>✓ 16</p> <p>✓ 11</p> <p>✓ 9</p> <p>✓ 18 vierkante eenheid (6)</p>

[19]

VRAAG 5

5.1.1	$x^2 + y^2 + 2x + 6y + 2 = 0$ $x^2 + 2x + 1 + y^2 + 6y + 9 = -2 + 10$ $(x+1)^2 + (y+3)^2 = 8$ $M(-1; -3)$	✓ $(x+1)^2 + (y+3)^2 = 8$ ✓ - 1 ✓ - 3 (3)
5.1.2	radius van sirkel $C_1 = \sqrt{8}$	✓ $\sqrt{8}$ (1)
5.2	$x^2 + (x-2)^2 + 2x + 6(x-2) + 2 = 0$ $x^2 + x^2 - 4x + 4 + 2x + 6x - 12 + 2 = 0$ $2x^2 + 4x - 6 = 0$ $x^2 + 2x - 3 = 0$ $(x+3)(x-1) = 0$ $x = -3 \text{ or } x \neq 1$ $y = -3 - 2 = -5$ <p>$\therefore D(-3; -5)$</p> <p style="text-align: center;">OF</p> $(x+1)^2 + (y+3)^2 = 8$ $\text{subst. } y = x - 2$ $(x+1)^2 + (x-2+3)^2 = 8$ $(x+1)^2 + (x+1)^2 = 8$ $x^2 + 2x - 3 = 0$ $(x+3)(x-1) = 0$ $x = -3 \text{ or } x \neq 1$ $y = -3 - 2 = -5$ <p style="text-align: center;">OF</p> $(x+1)^2 + (y+3)^2 = 8$ $\text{subst. } y = x - 2$ $(x+1)^2 + (x-2+3)^2 = 8$ $(x+1)^2 + (x+1)^2 = 8$ $(x+1)^2 = 4$ $x+1 = \pm 2$ $x = -3 \text{ or } x \neq 1$ $y = -3 - 2 = -5$ <p style="text-align: center;">OF</p>	✓ substitusie ✓ standaard vorm ✓ faktore ✓ waarde van x ✓ waarde van y (5)
		✓ substitusie ✓ standaard vorm ✓ faktore ✓ waarde van x ✓ waarde van y (5)
		✓ substitusie ✓ vereenvoudiging ✓ vierkantswortel van albei kante ✓ waarde van x ✓ waarde van y (5)

	<p>PM maak 'n 45° hoek met die x-as. $\sqrt{8} = \sqrt{2^2 + 2^2}$ Dus: $x_D = x_M - 2 = -1 - 2 = -3$ $y_D = -3 - 2 = -5$</p>	<p>✓✓ $\sqrt{8} = \sqrt{2^2 + 2^2}$ ✓ waarde van x ✓ waarde van y (5)</p>
5.3	<p>$MD \perp DB$ (raaklyn \perp radius) $MB^2 = MD^2 + DB^2$ (Pythagoras) $= (\sqrt{8})^2 + (4\sqrt{2})^2$ $= 40$ MB is die radius van C_2 $MB = \sqrt{40}$</p>	<p>✓ raaklyn \perp radius ✓ substitusie in Pythagoras ✓ $\sqrt{40}$ (3)</p>
5.4	<p>$(x+1)^2 + (y+3)^2 = 40$</p>	<p>✓ LK ✓ RK (2)</p>
5.5	<p>Afstand van $(2\sqrt{5}; 0)$ na middelpunt $= \sqrt{(2\sqrt{5}+1)^2 + (0+3)^2}$ $= 6,24$ $6,24 < 6,32$ ($\sqrt{40}$) Afstand van $(2\sqrt{5}; 0)$ na middelpunt $<$ radius van sirkel. $(2\sqrt{5}; 0)$ lê binne die sirkel.</p>	<p>✓ substitusie in afstand formule ✓ 6,24 ✓ $6,24 < 6,32$ ✓ afleiding (4)</p>

[18]

VRAAG 6

6.1.1	$A(-5; 3)$ $A'(-5+4; 3-3) = (-1; 0)$	$\checkmark -1$ $\checkmark 0$ (2)
6.1.2	$A'(-5; -3)$	$\checkmark -5$ $\checkmark -3$ (2)
6.2.1	Skaal faktor van vergroting is $\frac{K'M'}{KM} = \frac{15}{10} = \frac{3}{2}$ OF $K(-4; 2) \rightarrow K'(-6; 3) = K'\left(\frac{3}{2} \times -4; \frac{3}{2} \times 2\right)$ Skaalfaktor is $\frac{3}{2}$	$\checkmark \frac{K'M'}{KM}$ $\checkmark \frac{3}{2}$ \checkmark $\left(\frac{3}{2} \times -4; \frac{3}{2} \times 2\right)$ $\checkmark \frac{3}{2}$ (2)
6.2.2	$(x; y) \rightarrow \left(\frac{3}{2}x; \frac{3}{2}y\right)$	$\checkmark \frac{3}{2}x$ $\checkmark \frac{3}{2}y$ (2)
6.2.3	$P'\left(\frac{3}{2} \times 3; 2 \times \frac{3}{2}\right)$ $= P'\left(\frac{9}{2}; 3\right)$	$\checkmark \frac{9}{2}$ $\checkmark 3$ (2)
6.2.4	$a = 1$	$\checkmark \checkmark a = 1$ (2)
6.2.5	$K''(4; -2)$	$\checkmark 4 \checkmark -2$ (2)
6.2.6	$K'''K' = 5$ $K'M''' = 15$ $\frac{K'K'''}{K'M'''} = \frac{5}{15} = \frac{1}{3}$	$\checkmark K'''K' = 5$ $\checkmark K'M''' = 15$ $\checkmark \frac{1}{3}$ (3) [17]

VRAAG 7

7.1	$K'(b; -a)$	$\checkmark b$ $\checkmark -a$ (2)
7.2	$K''(b \cos \theta - a \sin \theta; -a \cos \theta - b \sin \theta)$ <p style="text-align: center;">OF</p> $K''(a \cos(90^\circ + \theta) + b \sin(90^\circ + \theta); b \cos(90^\circ + \theta) - a \sin(90^\circ + \theta))$ $= K''(-a \sin \theta + b \cos \theta; -b \sin \theta - a \cos \theta)$	\checkmark $b \cos \theta - a \sin \theta$ \checkmark $-a \cos \theta - b \sin \theta$ (2)
7.3	$T''(-(-4) \sin \theta + (-2) \cos \theta; -(-2) \sin \theta - (-4) \cos \theta)$ $= T''(4 \sin \theta - 2 \cos \theta; 2 \sin \theta + 4 \cos \theta)$ <p style="text-align: center;">OF</p> $T''(-2 \cos \theta - (-4) \sin \theta; -(-4) \cos \theta - (-2) \sin \theta)$ $= T''(-2 \cos \theta + 4 \sin \theta; 4 \cos \theta + 2 \sin \theta)$	$\checkmark 4 \sin \theta - 2 \cos \theta$ $\checkmark 2 \sin \theta + 4 \cos \theta$ (2) $\checkmark 4 \sin \theta - 2 \cos \theta$ $\checkmark 2 \sin \theta + 4 \cos \theta$ (2)
7.4	$2\sqrt{3} + 1 = 4 \sin \theta - 2 \cos \theta \dots\dots(1)$ $\sqrt{3} - 2 = 2 \sin \theta + 4 \cos \theta \dots\dots(2)$ $(2) \times 2: 2\sqrt{3} - 4 = 4 \sin \theta + 8 \cos \theta \dots(3)$ $(1) - (3): 5 = -10 \cos \theta$ $-\frac{1}{2} = \cos \theta$ $\therefore \theta = 180^\circ - 60^\circ = 120^\circ$ <p style="text-align: center;">OF</p> $2\sqrt{3} + 1 = 4 \sin \theta - 2 \cos \theta \dots\dots(1)$ $\sqrt{3} - 2 = 2 \sin \theta + 4 \cos \theta \dots\dots(2)$ $(1) \times 2: 4\sqrt{3} + 2 = 8 \sin \theta - 4 \cos \theta \dots(3)$ $(2) + (3): 5\sqrt{3} = 10 \sin \theta$ $\frac{\sqrt{3}}{2} = \sin \theta$ $\therefore \theta = 180^\circ - 60^\circ = 120^\circ$ <p style="text-align: center;">OF</p>	\checkmark substitusie om vergelyking te vorm \checkmark substitusie om vergelyking te vorm $\checkmark 5 = -10 \cos \theta$ $\checkmark -\frac{1}{2} = \cos \theta$ $\checkmark 120^\circ$ (5) \checkmark substitusie om vergelyking te vorm \checkmark substitusie om vergelyking te vorm $\checkmark 5\sqrt{3} = 10 \sin \theta$ $\checkmark \frac{\sqrt{3}}{2} = \sin \theta$ $\checkmark 120^\circ$ (5)

$m_{OT} = \frac{1}{2} \Rightarrow \tan X\hat{O}T = \frac{1}{2}$ $X\hat{O}T = 206,565\dots^\circ$ $m_{OT'} = \frac{\sqrt{3}-2}{2\sqrt{3}+1} \Rightarrow \tan X\hat{O}T'' = \frac{\sqrt{3}-2}{2\sqrt{3}+1} = -0,06\dots$ $X\hat{O}T = -3,434^\circ$ $90^\circ + \theta = 209,99\dots^\circ \approx 210^\circ$ $\theta = 120^\circ$ <p style="text-align: center;">OF</p> $(TT')^2 = OT^2 + (OT')^2 - 2(OT)(OT') \cdot \cos(90^\circ + \theta)$ $40 + 20\sqrt{3} = 40 - 40 \cdot \cos(90^\circ + \theta)$ $\cos(90^\circ + \theta) = -\frac{\sqrt{3}}{2}$ $90^\circ + \theta = 150^\circ$ $\theta = 60^\circ$	$\checkmark \tan X\hat{O}T = \frac{1}{2}$ $\checkmark 206.565\dots^\circ$ $\checkmark -0,06\dots$ $\checkmark -3.434^\circ$ $\checkmark 120^\circ$ <p style="text-align: right;">(5)</p> $\checkmark (TT')^2$ $= 40 + 20\sqrt{3}$ $\checkmark \text{substitusie}$ in cos-reël $\checkmark \text{vereenvoudiging}$ $\checkmark 150^\circ$ $\checkmark 60^\circ$ <p style="text-align: right;">(5)</p> <p style="text-align: right;">[11]</p>
---	--

VRAAG 8

<p>8.1</p>	$1 - \sin^2 \theta + 3 - \cos^2 \theta$ $= 4 - (\sin^2 \theta + \cos^2 \theta)$ $= 3$ <p style="text-align: center;">OF</p> $\cos^2 \theta + 3 - \cos^2 \theta$ $= 3$	<p>✓ vereenvoudiging</p> <p>✓ 3 (2)</p> <p>✓ substitusie met identiteit</p> <p>✓ 3 (2)</p>
<p>8.2</p>	$\sqrt{4^{\sin 150^\circ} \cdot 2^{3 \tan 225^\circ}}$ $= \sqrt{4^{\sin 30^\circ} \cdot 2^{3 \tan 45^\circ}}$ $= \sqrt{(2^2)^{\frac{1}{2}} \cdot 2^3}$ $= \sqrt{16}$ $= 4$ <p style="text-align: center;">OF</p> $\sin 150^\circ = \frac{1}{2}$ $\tan 225^\circ = 1$ $\sqrt{4^{\sin 150^\circ} 2^{3 \tan 225^\circ}}$ $= \sqrt{4^{\frac{1}{2}} 2^3}$ $= \sqrt{2 \cdot 2^3}$ $= \sqrt{16}$ $= 4$	<p>✓ herskryf met reduksie formules</p> <p>✓ stel spesiale hoeke in</p> <p>✓ vereenvoudiging</p> <p>✓ 4 (4)</p> <p>✓ $\sin 150^\circ = \frac{1}{2}$</p> <p>✓ $\tan 225^\circ = 1$</p> <p>✓ $4^{\frac{1}{2}} = 2$</p> <p>✓ 4 (4)</p>
<p>8.3</p>	$LK = \frac{\cos^2 x (\sin^2 x + \cos^2 x)}{1 - \sin x}$ $= \frac{\cos^2 x \cdot (1)}{1 - \sin x}$ $= \frac{(1 - \sin^2 x)}{1 - \sin x}$ $= \frac{(1 + \sin x)(1 - \sin x)}{1 - \sin x}$ $= 1 + \sin x$ $= RK$	<p>✓ faktoriserings</p> <p>✓ 1</p> <p>✓ $1 - \sin^2 x$</p> <p>✓ faktore</p> <p>(4)</p>

8.4	$\begin{aligned} \cos 3\theta &= \cos(2\theta + \theta) \\ &= \cos 2\theta \cdot \cos \theta - \sin 2\theta \cdot \sin \theta \\ &= (2\cos^2 \theta - 1) \cdot \cos \theta - 2\sin \theta \cdot \cos \theta \cdot \sin \theta \\ &= 2\cos^3 \theta - \cos \theta - 2\sin^2 \theta \cdot \cos \theta \\ &= 2\cos^3 \theta - \cos \theta - 2(1 - \cos^2 \theta) \cdot \cos \theta \\ &= 2\cos^3 \theta - \cos \theta - 2\cos \theta + 2\cos^3 \theta \\ &= 4\cos^3 \theta - 3\cos \theta \end{aligned}$	$\begin{aligned} &\checkmark \text{uitbreiding} \\ &\checkmark 2\cos^2 \theta - 1 \\ &\checkmark 2\sin \theta \cdot \cos \theta \\ &\checkmark 1 - \cos^2 \theta \end{aligned}$ <p style="text-align: right;">(4)</p>
8.5	$\begin{aligned} \cos 3\theta &= 4\cos^3 \theta - 3\cos \theta \\ \cos 3(20^\circ) &= 4\cos^3(20^\circ) - 3\cos(20^\circ) \\ \frac{1}{2} &= 4x^3 - 3x \\ 8x^3 - 6x - 1 &= 0 \end{aligned}$	$\begin{aligned} &\checkmark \theta = 20^\circ \\ &\checkmark \cos 60^\circ = \frac{1}{2} \end{aligned}$ <p style="text-align: right;">(2)</p> <p style="text-align: right;">[16]</p>

VRAAG 9

<p>9.1</p>	$\frac{\cos 160^\circ \cdot \tan 200^\circ}{2 \sin(-10^\circ)}$ $= \frac{(-\cos 20^\circ)(\tan 20^\circ)}{2(-\sin 10^\circ)}$ $= \frac{(-\cos 20^\circ)\left(\frac{\sin 20^\circ}{\cos 20^\circ}\right)}{-2 \sin 10^\circ}$ $= \frac{2 \sin 10^\circ \cos 10^\circ}{2 \sin 10^\circ}$ $= \cos 10^\circ$	<p>✓ $-\cos 20^\circ$ ✓ $\tan 20^\circ$ ✓ $-\sin 10^\circ$</p> <p>✓ $\frac{\sin 20^\circ}{\cos 20^\circ}$ ✓ $2 \sin 10^\circ \cos 10^\circ$</p> <p>✓ $\cos 10^\circ$</p> <p>(6)</p>
<p>9.2.1</p>	$LK = \cos(x + 45^\circ) \cdot \cos(x - 45^\circ)$ $= (\cos x \cos 45^\circ - \sin x \sin 45^\circ)(\cos x \cos 45^\circ + \sin x \sin 45^\circ)$ $= \cos^2 x \cos^2 45^\circ - \sin^2 x \sin^2 45^\circ$ $= \cos^2 x \left(\frac{\sqrt{2}}{2}\right)^2 - \sin^2 x \left(\frac{\sqrt{2}}{2}\right)^2 \text{ or } \left[\cos^2 x \left(\frac{1}{\sqrt{2}}\right)^2 - \sin^2 x \left(\frac{1}{\sqrt{2}}\right)^2 \right]$ $= \frac{1}{2} \cos^2 x - \frac{1}{2} \sin^2 x$ $= \frac{1}{2} (\cos^2 x - \sin^2 x)$ $= \frac{1}{2} \cos 2x$ <p style="text-align: center;">OF</p> $2 \cos \alpha \cos \beta = \cos(\alpha + \beta) + \cos(\alpha - \beta)$ $\cos \alpha \cos \beta = \frac{1}{2} (\cos(\alpha + \beta) + \cos(\alpha - \beta))$ <p>Let $\alpha = x + 45^\circ$ and $\beta = x - 45^\circ$</p> $\therefore \cos(x + 45^\circ) \cos(x - 45^\circ)$ $= \frac{1}{2} (\cos((x + 45^\circ) + (x - 45^\circ)) + \cos((x + 45^\circ) - (x - 45^\circ)))$ $= \frac{1}{2} (\cos 2x + \cos 90^\circ)$ $= \frac{1}{2} \cos 2x$	<p>✓ brei uit $\cos(x + 45^\circ)$</p> <p>✓ brei uit $\cos(x - 45^\circ)$</p> <p>✓ stel in spesiale hoeke</p> <p>✓ vereenvoudiging</p> <p>(4)</p> <p>✓✓ lei identiteit af</p> <p>✓ substitusie</p> <p>✓ vereenvoudiging</p> <p>(4)</p>

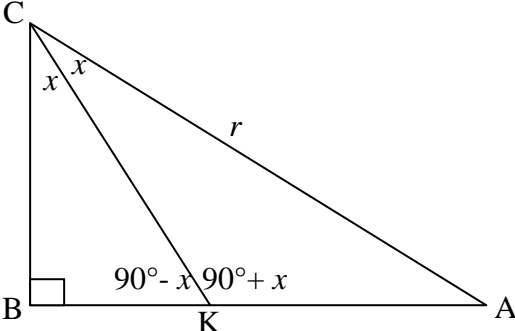
<p>9.2.2</p>	<p>$\cos(x + 45^\circ)\cos(x - 45^\circ)$ het 'n minimum waar $\frac{1}{2}\cos 2x$ 'n minimum het.</p> <p>Die minimum waarde van $\cos 2x$ is -1</p> <p>$\cos 2x = -1$ $2x = 180^\circ$ $x = 90^\circ$</p>	<p>✓ minimum waarde van -1</p> <p>✓ $2x = 180^\circ$ ✓ $x = 90^\circ$</p> <p>(3)</p> <p>[13]</p>
--------------	---	---

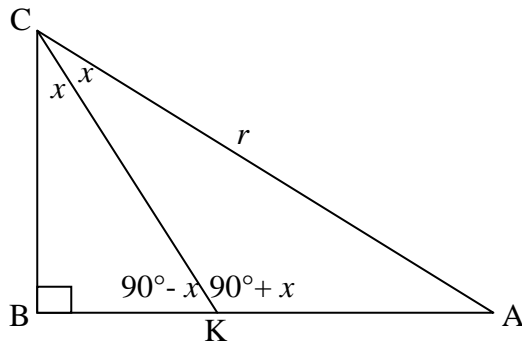
VRAAG 10

<p>10.1</p>	<p>Waardeversameling = $[-1 ; 1]$</p>	<p>✓✓ $[-1 ; 1]$</p> <p>(2)</p>
<p>10.2</p>	<p>$f\left(\frac{3}{2}x\right) = \sin 2\left(\frac{3}{2}x\right)$ $= \sin 3x$ $\therefore \text{Periode} = \frac{360^\circ}{3} = 120^\circ$</p> <p style="text-align: center;">OF</p> <p>$f\left(\frac{3}{2}x\right) = \sin 2\left(\frac{3}{2}x\right)$ $= \sin 3x$ $= \sin(3x + 360^\circ)$ $= \sin 3(x + 120^\circ)$ $\therefore \text{Periode} = 120^\circ$</p>	<p>✓ $\sin 3x$</p> <p>✓ 120°</p> <p>(2)</p> <p>✓ $\sin 3x$</p> <p>✓ 120°</p> <p>(2)</p>

<p>10.3</p>		<ul style="list-style-type: none"> ✓ x afsnitte ✓✓ draaipunte ✓ vorm <p style="text-align: right;">(4)</p>
<p>10.4</p>	<p>$(-180^\circ; -90^\circ)$ of $(-60^\circ; 0^\circ)$</p> <p style="text-align: center;">OF</p> <p>$-180^\circ < x < -90^\circ$ of $-60^\circ < x < 0^\circ$</p>	<ul style="list-style-type: none"> ✓ $> -180^\circ$ ✓ $< -90^\circ$ ✓ $> -60^\circ$ ✓ $< 0^\circ$ <p style="text-align: right;">(4)</p>
<p>10.5</p>	<p>$y = \sin 2(x + 30^\circ)$ \therefore translasie van 30° na links</p>	<ul style="list-style-type: none"> ✓ translasie 30° ✓ na links <p style="text-align: right;">(2)</p>
<p>10.6</p>	<p>$\sin 2x = \cos(x - 30^\circ)$ $\sin 2x = \sin[90^\circ - (x - 30^\circ)]$ $= \sin(120^\circ - x)$ $2x = 120^\circ - x + 360^\circ k; k \in \mathbb{Z}$ $2x = 180^\circ - (120^\circ - x) + 360^\circ k$ $3x = 120^\circ + 360^\circ k$ of $2x - x = 60^\circ + 360^\circ k$ $x = 40^\circ + 120^\circ k; k \in \mathbb{Z}$ $x = 60^\circ + 360^\circ k; k \in \mathbb{Z}$</p> <p style="text-align: center;">OF</p> <p>$\sin 2x = \cos(x - 30^\circ)$ $\cos(90^\circ - 2x) = \cos(x - 30^\circ)$ $90^\circ - 2x = x - 30^\circ + 360^\circ k$ or $90^\circ - 2x = 360^\circ - (x - 30^\circ) + 360^\circ k$ $-3x = -120^\circ + 360^\circ k$ $-x = 300^\circ + 360^\circ k$ $x = 40^\circ - 120^\circ k; k \in \mathbb{Z}$ $x = -300^\circ - 360^\circ k; k \in \mathbb{Z}$</p> <p>$\therefore x = 40^\circ + 120^\circ k$ of $x = 60^\circ + 360^\circ k ; k \in \mathbb{Z}$</p>	<ul style="list-style-type: none"> ✓ gebruik ko-funksie ✓ $2x = 120^\circ - x + 360^\circ k$ ✓ $x = 40^\circ + 120^\circ k$ ✓ $2x = 180^\circ - (120^\circ - x) + 360^\circ k$ ✓ $x = 60^\circ + 360^\circ k$ ✓ $k \in \mathbb{Z}$ <p style="text-align: right;">(6)</p> <ul style="list-style-type: none"> ✓ $\cos(90^\circ - x) = \cos(x - 30^\circ)$ ✓ $90^\circ - 2x = x - 30^\circ + 360^\circ k$ ✓ $x = 40^\circ - 120^\circ k$ ✓ $90^\circ - 2x = 360^\circ - (x - 30^\circ) + 360^\circ k$ ✓ $x = -300^\circ - 360^\circ k$ ✓ $k \in \mathbb{Z}$ <p style="text-align: right;">(6)</p> <p style="text-align: right;">[20]</p>

VRAAG 11

<p>11.1</p>	$\frac{AB}{r} = \sin 2x$ $AB = r \sin 2x$	$\checkmark \frac{AB}{r} = \sin 2x$ $\checkmark AB = r \sin 2x$ <p>(2)</p>
<p>11.2</p>	$\hat{AKC} = 90^\circ + x$	$\checkmark \hat{AKC} = 90^\circ + x$ <p>(1)</p>
<p>11.3</p>	<div style="text-align: center;">  </div> <p>In $\triangle AKC$:</p> $\frac{\sin \hat{AKC}}{AC} = \frac{\sin \hat{ACK}}{AK}$ $\frac{\sin(90^\circ + x)}{r} = \frac{\sin x}{AK}$ $AK = \frac{r \sin x}{\sin(90^\circ + x)} = \frac{r \sin x}{\cos x}$ $\frac{AK}{AB} = \frac{2}{3}$ $\frac{\left(\frac{r \sin x}{\cos x}\right)}{r \sin 2x} = \frac{2}{3}$ $\frac{\sin x}{\cos x} = \frac{2}{2 \sin x \cos x}$ $\frac{\sin x}{\cos x} \times \frac{1}{2 \sin x \cos x} = \frac{2}{3}$ $\frac{1}{2 \cos^2 x} = \frac{2}{3}$ $4 \cos^2 x = 3$ $\cos x = \frac{\sqrt{3}}{2}$ $x = 30^\circ$ <p style="text-align: center;">OF</p>	$\checkmark \text{sin reël}$ $\checkmark \text{substitusie}$ $\checkmark \text{maak AK onderwerp van die formule}$ $\checkmark \cos x$ $\checkmark 2 \sin x \cdot \cos x$ $\checkmark \frac{1}{2 \cos^2 x}$ $\checkmark \cos x = \frac{\sqrt{3}}{2}$ $\checkmark x = 30^\circ$ <p>(8)</p>



Gebruik die sin-formule in $\triangle CBK$ en $\triangle CKA$:

$$\frac{\sin x}{BK} = \frac{\sin(90^\circ - x)}{BC} \quad \text{en} \quad \frac{\sin x}{KA} = \frac{\sin(90^\circ + x)}{AC}$$

$$\therefore \frac{BK}{BC} = \frac{KA}{AC}$$

$$\therefore \frac{1}{BC} = \frac{2}{r}$$

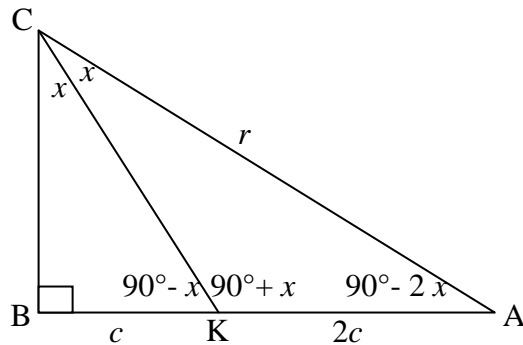
$$\therefore BC = \frac{1}{2}r$$

$$\therefore \cos 2x = \frac{BC}{AC} = \frac{\frac{1}{2}r}{r} = \frac{1}{2}$$

$$\therefore 2x = 60^\circ$$

$$\therefore x = 30^\circ$$

OF



$$\triangle CBK: KC = \frac{c}{\sin x}$$

$$\triangle CKA: \frac{\sin x}{2c} = \frac{\sin(90^\circ - 2x)}{KC} = \frac{\sin(90^\circ - 2x) \cdot \sin x}{c}$$

$$\therefore \sin(90^\circ - 2x) = \frac{1}{2} = \sin 30^\circ$$

$$\therefore \begin{aligned} 90^\circ - 2x &= 30^\circ \\ x &= 30^\circ \end{aligned}$$

$$\checkmark \frac{\sin x}{BK} = \frac{\sin(90^\circ - x)}{BC}$$

$$\checkmark \frac{\sin x}{KA} = \frac{\sin(90^\circ + x)}{AC}$$

$$\checkmark \frac{BK}{BC} = \frac{KA}{AC}$$

$$\checkmark \frac{1}{BC} = \frac{2}{r}$$

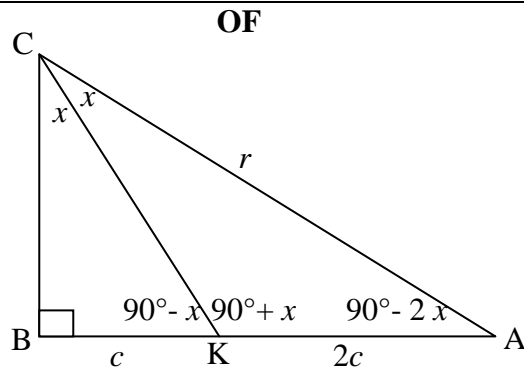
$$\checkmark BC = \frac{1}{2}r$$

$$\checkmark \cos 2x = \frac{1}{2}$$

$$\checkmark 2x = 60^\circ$$

$$\checkmark x = 30^\circ$$

(8)



ΔCBK :

$$\sin 2x = \frac{3c}{r} = 2 \sin x \cdot \cos x$$

$$\therefore r \sin x = \frac{3c}{2 \cos x} \dots\dots\dots(1)$$

ΔCKA :

$$\frac{2c}{\sin x} = \frac{r}{\cos x}$$

$$\therefore r \sin x = 2c \cos x \dots\dots\dots(2)$$

Stel (1) en (2) gelyk:

$$2c \cdot \cos x = \frac{3c}{2 \cos x}$$

$$\therefore \cos^2 x = \frac{3}{4}$$

$$\therefore \cos x = \frac{\sqrt{3}}{2}$$

$$\therefore x = 30^\circ$$

OF

(8)

$$\begin{aligned} \checkmark \sin 2x &= \frac{3c}{r} \\ \checkmark 2 \sin x \cdot \cos x & \\ \checkmark r \sin x &= \frac{3c}{2 \cos x} \end{aligned}$$

$$\begin{aligned} \checkmark \frac{2c}{\sin x} &= \frac{r}{\cos x} \\ \checkmark r \sin x &= 2c \cos x \end{aligned}$$

\checkmark stel gelyk

$$\begin{aligned} \checkmark \cos x &= \frac{\sqrt{3}}{2} \\ \checkmark 30^\circ & \end{aligned}$$

(8)

$$\frac{AK}{KB} = \frac{2}{1} = 2$$

$$2 = \frac{\frac{1}{2} AK \cdot BC}{\frac{1}{2} BK \cdot BC}$$

$$= \frac{\text{area AKC}}{\text{area ABC}}$$

$$= \frac{\frac{1}{2} r CK \sin x}{\frac{1}{2} BC \cdot CK \sin x}$$

$$= \frac{r}{BC}$$

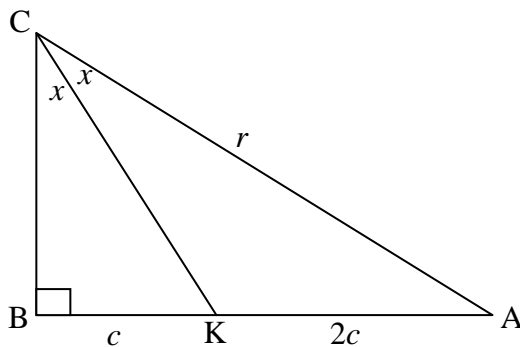
$$\therefore \frac{BC}{r} = \frac{1}{2}$$

$$\therefore \cos 2x = \frac{1}{2}$$

$$\therefore 2x = 60^\circ$$

$$\therefore x = 30^\circ$$

OF



Deur gebruik te maak van die Interne Halveerder Stelling:

$$\frac{CB}{CA} = \frac{BK}{KA} = \frac{1}{2}$$

$$\cos 2x = \frac{1}{2}$$

$$2x = 60^\circ$$

$$x = 30^\circ$$

✓ vermenigvuldig met $\frac{1}{2} BC$
✓ area van driehoeke

✓ area formule in driehoeke

$$\checkmark \frac{r}{BC} = 2$$

$$\checkmark \frac{BC}{r} = \frac{1}{2}$$

$$\checkmark \cos 2x = \frac{1}{2}$$

$$\checkmark 2x = 60^\circ$$

$$\checkmark x = 30^\circ$$

(8)

✓✓

Deur die spesifieke stelling te noem

$$\checkmark \checkmark \checkmark \frac{CB}{CA} = \frac{BK}{KA} = \frac{1}{2}$$

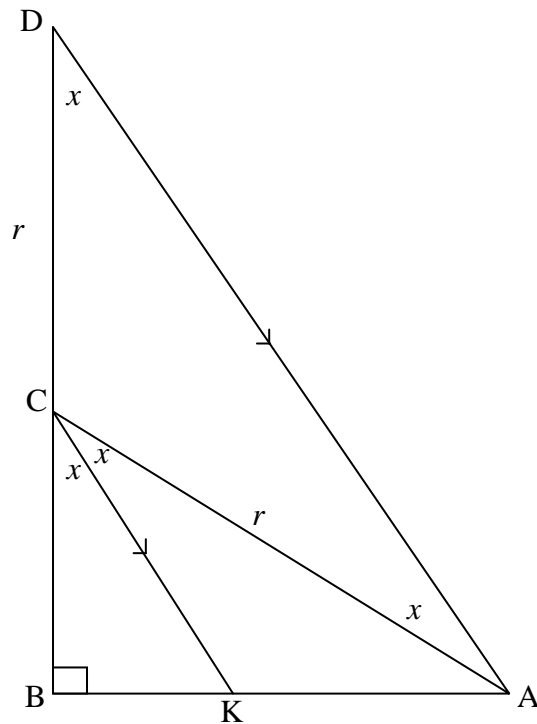
$$\checkmark \cos 2x = \frac{1}{2}$$

$$\checkmark 2x = 60^\circ$$

$$\checkmark x = 30^\circ$$

(8)

OF



Verleng BC na D en teken CK parallel aan DA.

$$\hat{C}AD = \hat{K}CA \text{ and } \hat{B}CK = \hat{D}$$

$$\therefore DC = CA = r$$

$$\therefore \triangle BKC \parallel \triangle BAD$$

$$\therefore \frac{BK}{BA} = \frac{BC}{BD} = 3$$

$$\therefore BD = 3BC = BC + r$$

$$\therefore BC = \frac{1}{2}r$$

$$\therefore \cos 2x = \frac{\frac{1}{2}r}{r} = \frac{1}{2}$$

$$\therefore 2x = 60^\circ$$

$$\therefore x = 30^\circ$$

$$\checkmark DC = CA = r$$

$$\checkmark \triangle BKC \parallel \triangle BAD$$

$$\checkmark \frac{BK}{BA} = \frac{BC}{BD} = 3$$

$$\checkmark BD = BC + r$$

$$\checkmark BC = \frac{1}{2}r$$

$$\checkmark \cos 2x = \frac{1}{2}$$

$$\checkmark 2x = 60^\circ$$

$$\checkmark 30^\circ$$

(8)

[11]

TOTAAL: 150