



basic education

Department:
Basic Education
REPUBLIC OF SOUTH AFRICA

AMANQAKU

UVAVANYO LONYAKA NONYAKA KUZWELONKE 2014 IBANGA 1 IMATHEMATIKA: ISIXHOSA UVAVANYO

AMANQAKU: 20

IXESHA: 1 IYURE

IPHONDO _____

ISITHILI _____

ISEKETHE _____

IGAMA LESIKOLO _____

INOMBOLO YE-EMIS (9 iidijithi)

--	--	--	--	--	--	--	--	--

IBANGA (Umz 1A) _____

IFANI _____

IGAMA _____

ISINI (✓)

INKWENKWE

INTOMBAZANA

UMHLA WOKUZALWA

C	C	Y	Y	M	M	D	D
---	---	---	---	---	---	---	---

Olu vavanyo lunamaphepha asi-8 ngaphandle koqweqwe.

Imiyalelo kutitshala:

1. Fundela abafundi umbuzo ngamnye ngokucacileyo ungangxamanga.
2. Funda umbuzo kube kabini ubuncinane, ngelixa bejonge kwiincwadana zabo.
3. Banike ithuba lokuba bazibhalele ngokwabo kwizithuba ezinikiweyo.
4. Wonke umsebenzi mawenziwe kweli phepha, musa ukusebenza kwiphepha elisecaleni.
5. Bakuba begqibile, qhuba ubafundele umbuzo olandelayo.
6. Landela le migaqo ingasentla de ufike kumbuzo wokugqibela.
7. Ukusetyenziswa kwekhalthyuleyitha akuvumelekanga.
8. Uvavanyo lunamanqaku angama-20.
9. Uvavanyo luyimizuzu engama-60.
10. Yenza umsebenzi wokuziqhelisa nabafundi.

Umsebenzi wokuziqhelisa

8 - 5 = 3. Impendulo ngokubala ngentloko/imentali


okanye

Impendulo ngokusebenzisa imifanekiso/imizobo.




Uvavanyo luqala kwiphepha elilandelayo.

1. Bala imizobo yeentliziyo.



Imizobo yeentliziyo ngama _____.

2. Bala imifanekiso yeenkomo uze ugqibezele u 2.1 no 2.2.



2.1 Isimboli yenani ngu _____.

2.2 Igama lenani ngu _____.

3. Bhala la manani ukusuka kwelona lincinci ukuya kwelona likhulu.

13, 8, 3, 4, 11

_____, _____, _____, _____, _____

4. Phendula u 4.1 no 4.2.

4.1 Ihafu ye-14 = _____

4.2 Calucalula eli nani.

$$15 = \underline{\quad} + \underline{\quad}$$

5. UXola uye esikolweni enamabhastile ali-15. Ugoduke namabhastile ali-11. Ulahlekelwe ngamabhastile amangaphi esikolweni?

6. Jonga lo mfanekiso ungezantsi. Mangaphi amavili eebhayisekile ezi-6 ewonke? Bhala isivakalisi samanani kumgca ongezantsi.



_____ = _____

7. Yohlulela abantwana aba-3 iibhisikithi ezili-12 ngokulinganayo. Umntwana ngamnye uya kufumana iibhisikithi ezingaphi?



Umntwana ngamnye uya kufumana iibhisikithi e_____.

8. UEsihle uthenge irula nge-R6,00. Yimalini itshintshi yakhe xa ebhatele nge-R10 eliphepha?

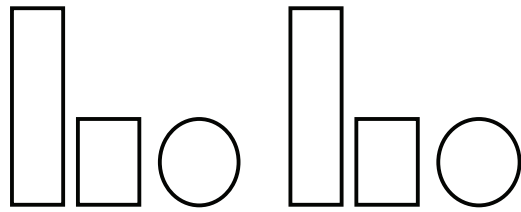
Uya kufumana i R _____ itshintshi.

9. Fakela impendulo.

$$8+3 = \square$$

10. Phendula u 10.1 no 10.2.

10.1 Phinda le pateni kube kanye qha.




10.2 Gqibezela ipateni yamanani.


20	19	18			15
----	----	----	--	--	----

11. Phendula u 11.1 no 11.2.

11.1 Zoba uphawu (x) kwimilo enamacala angqalileyo.



11.2 Krwela umgca wolingano macala (isimetri).

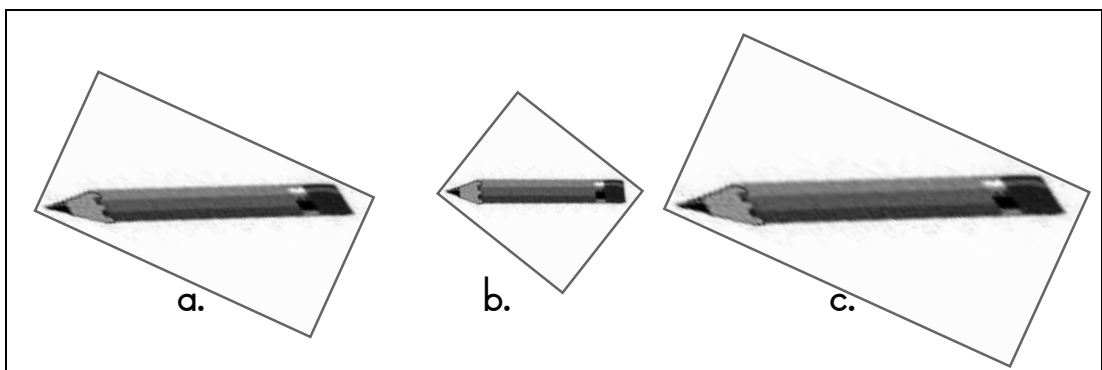


12. Fakela usuku lweveki olushiyiweyo.

Lwesibini, Mgqibelo, Lwesine, Cawa, Lwesihlanu, Mvulo,
Lwesithathu

Mvulo
Lwesibini
Lwesithathu
Lwesine
Mgqibelo
Cawa

13. Zoba u (x) kweyona pensile imfutshane.



14. Jonga le grafu yomfanekiso uze uphendule umbuzo olandelayo.

Imali eqokelelwe ukutyelela kumyezo wezilwanyana	
Thulani	
Lumka	
Jongi	
Lelethu	

Ngubani oqokelele eyona mali ininzi ? _____

EWONKE: 20