



basic education

Department:
Basic Education
REPUBLIC OF SOUTH AFRICA

EMAMAKI

LUHLOLO LWAVELONKHE LWEMNYAKA NEMNYAKA 2014 LIBANGA 1 TIBALO: SISWATI SIVIVINYO

EMAMAKI: 20

SIKHATSI: 1 LI-AWA

IPHROVINSI _____

IDISTRIKTHI _____

SIYINGI _____

LIGAMA LESIKOLO _____

INOMBOLO YE-EMISI (emadijithi la- 9)

--	--	--	--	--	--	--	--	--	--

LIBANGA (sib. 1A) _____

SIBONGO _____

LIGAMA _____

BULILI (✓)

UMFANA

INTFOMBATANA

LUSUKU LWEKUTALWA

C	C	Y	Y	M	M	D	D
---	---	---	---	---	---	---	---

Lesivivinyo sinemakhasi la-8 ngaphandle kwelikhasi langaphandle.

Ticondziso tathishela:

1. Fundzela bafundzi umbuto ngalokuvakalako ungasheshisi.
2. Fundza umbuto kabili, ngalesikhatsi bafundzi balandzela emabhukwini abo.
3. Banike sikhatsi sekutibhalela ngekwabo timphendvulo etikhaleni letinikiwe.
4. Wonkhe umsebenti ukhon jiswe ephepheni futsi ungasebentisi liphepha lelinye.
5. Nangabe seabcedzile, chubeka ufundze umbuto lolandzelako.
6. Landzela leyondlela ute ufike embutweni wekugcina.
7. Ungavumeli kuset jentiswa kwemshini wekubala.
8. Sivivinyo sinemamaki la-20.
9. Sikhatsi sekubhala sivivinyo ngemaminithi la-60.
10. Yenta umsebenti wekutilolonga nebafundzi.

Umsebenti wekutilolonga

8 - 5 = 3: Imphendvulo ngekusebentisa tibalo tenhloko


nobe

Imphendvulo ngekusebentisa titfombe.



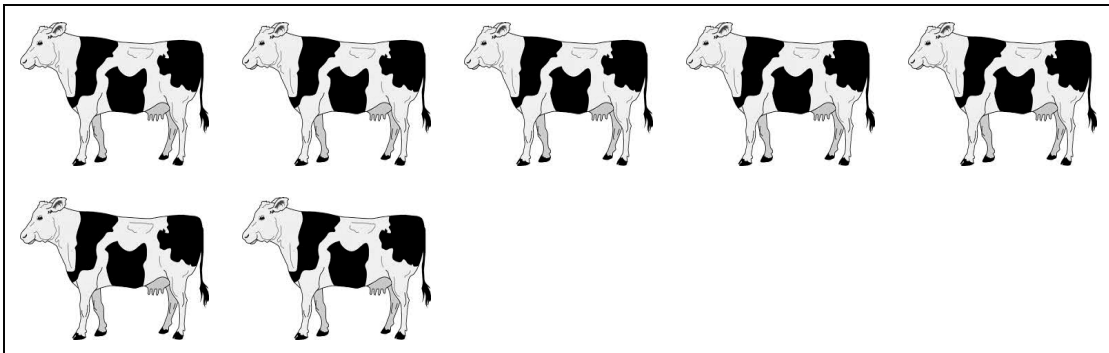
Sivivinyo sicala ekhasini lelilandzelako.

1. Bala titfombe tetinhlitiyo.



Kunetifombe tetinhlitiyo leti _____.

2. Bala letifombe tetinkhomo bese ucedzela 2.1 na 2.2.



2.1 Lumphawu lwenombolo ngu_____.

2.2 Ligama lenombolo _____.

3. Bhala letinombolo kusukela kulencane kuye kulenkulu.

13, 8, 3, 4, 11

_____, _____, _____, _____, _____

4. Phendvula 4.1 na 4.2


4.1 Hhafula $14 = \underline{\hspace{2cm}}$

4.2 Hlahlela lenombolo.

$15 = \underline{\hspace{1cm}} + \underline{\hspace{1cm}}$

5. Xola uye esikolweni nemamabuli la-15. Wabuyela ekhaya nemamabuli la-11. Ulahlekelwe ngemamabuli lamangaki esikolweni?

6. Buka letitfombe letingentasi. Mangaki emasondvo alamabhayisikili la-6 sekawonkhe? Bhala umushotinombolo emgce ni longentasi.



_____ = _____

7. Yabela bantf wana laba-3 emakhekhe la-12 ngalokulinganako. Mangaki emakhekhe latawutfolwa ngumntf wana ngamunye?



Umntf wana ngamunye utawutfolwa emakhekhe la _____

8. Lindi utsenge irula nge-R6,00. Utawutfo la malini int jint ji nakabhadele nge-R10 loliphepha?

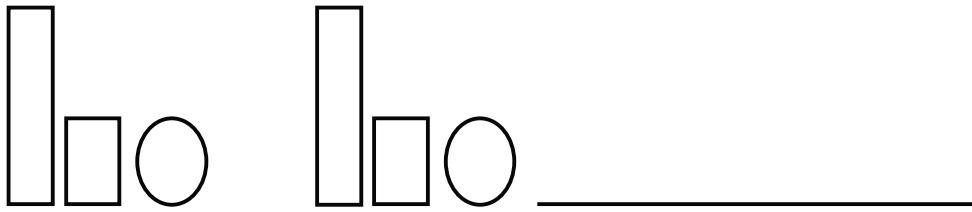
Utawutfo la R _____ int jint ji.

9. Gcwalisa imphendvulo.

$$8 + 3 = \boxed{}$$

10. Phendvula 10.1 na 10.2.

10.1 Phindza lephethini kanye kuphela.



10.2 Cedzela lephethini yetinombolo.


20	19	18			15
----	----	----	--	--	----

11. Phendvula 11.1 na 11.2.

11.1 Dvweba (x) kubunjwa lonemacele lacondzile.



11.2 Dvweba umugca lohlukana emkhatsini ngalokufanako (isimethri).

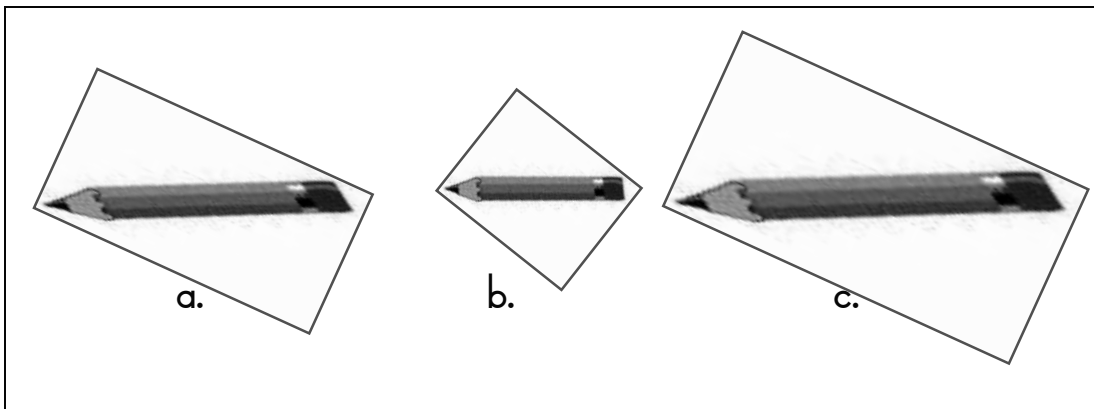


12. Gcwalisa lilanga lelishiyekile leliviki.





Lesibili, Umgcibelo, Lesine, Lisontfo, Lesihlanu, Umsombuluko, Lesitsatfu

Umsombuluko
Lesibili
Lesitsatfu
Lesine
Umgcibelo
Lisontfo

13. Dvweba (x) etulu kwepeniseli lemfisha kakhulu.



14. Buka legrafu titfombe bese uphendvula umbuto lolandzelako.

Imali lekhuliselwe luhambo lwekuya eZoo	
Thato	
Lungile	
Jabu	
Lerato	

Ngubani lokhulise imali lenyenti kakhulu? _____

SAMBA: 20

