



basic education

Department:
Basic Education
REPUBLIC OF SOUTH AFRICA

MARAGA

MULINGO WA LUSHAKA WA NWAHA NGA NWAHA WA 2014 GIREIDI 2 MBALO: TSHIVENDA MULINGO

MARAGA: 30

TSHIFHINGA: AWARA 1

VUNDU _____

TSHITIRIKI _____

LIISELA _____

DZINA LA TSHIKOLO _____

NOMBORO YA EMISI (didzhiti dza 9)

--	--	--	--	--	--	--	--	--

KI LASI (Tsumbo: 2A) _____

TSHIFANI _____

DZINA _____

MBEU (✓)

MUTUKANA

MUSIDZANA

DUVHA LA MABEBO

C	C	Y	Y	M	M	D	D
---	---	---	---	---	---	---	---

Mulingo uyu u na masiatari a 12 hu sa katelwi na siațari ła nga nnda.

Ndaela kha mugudisi:

1. Kha vha vhalele vhagudi mbudziso nga u ongolowa na hone zwi tshi pfala.
2. Kha vha vhale mbudziso luvhili, ngeno vhagudi vha tshi khou tevhelela kha zwibugwana zwavho.
3. Kha vha vha fhe tshifhinga tsha u fhindula mbudziso nga vhone vhaṅe, kha zwikhala zwe vha fhiwa.
4. Mushumo wothe u sumbedzwe kha bambiri la mbudziso, hu si kha bambiri la mveto-mveto/rafu.
5. Musi vho fhedza, vha vha vhalele mbudziso i tevhelaho.
6. Kha vha ite ngauralo u swika kha mbudziso ya u fhedzisela.
7. Vha songo tenda hu tshi shumiswa khalikhuleitha.
8. Mulingo u na maraga dza 30.
9. Tshifhinga tsha mulingo ndi minetse dza 60.
10. Kha vha shume ndowendowe ya u rangela na vhagudi.

Ngowendowe ya u rangela

Tanganyani 36 na 25. Phindulo nga u shumisa murekanyo wa mbalo ndi

$$36 + 25 = 61.$$

kana

Phindulo nga u shumisa maitete "a u pwashekanya".

$$\begin{aligned} & 36 + 25 \\ &= 30 + 6 + 20 + 5 \\ &= 30 + 20 + 6 + 5 \\ &= 50 + 11 \\ &= 61 \end{aligned}$$

kana

$$\begin{aligned} & 6 + 5 = 11 \\ & 30 + 20 = 50 \\ & \underline{36 + 25 = 61} \end{aligned}$$

kana

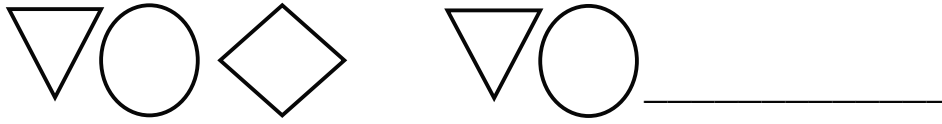
Phindulo nga u shumisa maitete "a u tanganyisa ni tshi isa phanda".

$$36 + 20 \longrightarrow 56 + 5 \longrightarrow 61$$

Ni songo shumisa maitete "a u tsisa".

Mulingo u thoma kha siatari li tevhelaho.


1. Fhedzisani phetheni nga u ola tshivhumbeo tshithihi.



2. Fhedzisani:


	Tshiga	Dzina la nomboro
2.1		Dana furathitane
2.2	72	

3. Swifhadzani mbili tsha thanu kha muolo we na newa.



4. Nwalani vhuimo ha nomboro yo talelwaho 47.

5. Olani tshivhumbeo tshithihi tsha tshitendeledzi.



6. Tingedzelani ledere li re na phindulo yone.

Tshiga tshi shumiswaho kha $63 \text{ ____ } 12 = 51$ ndi ...

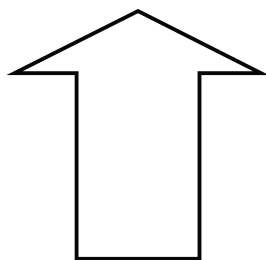
A +

B =

C ÷

D -

7. Olani mutalo muthihi wa ndinganyahuvhili (simeṭiri).




8. Nwalani nomboro dze na newa u bva kha thukhusa u ya kha khulwanesa.

139, 152, 78, 93, 125, 171


_____, _____, _____, _____, _____, _____

9. Fhindulani 9.1 na 9.2.


9.1 Hafu ya 48 = _____.



9.2 $\frac{3}{4}$ kavhili = _____.



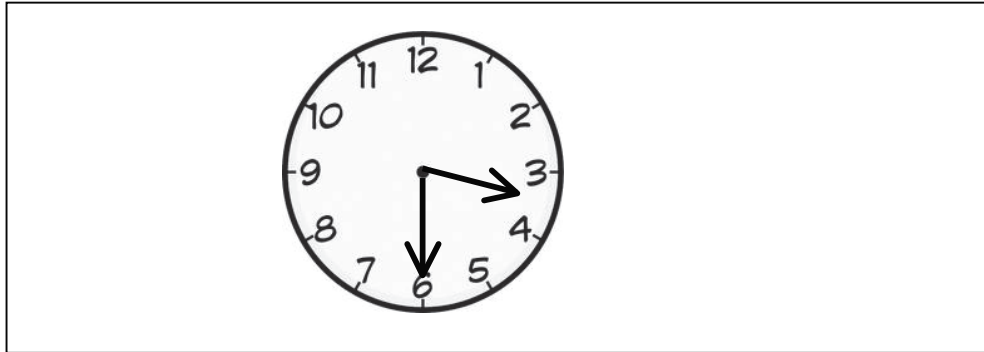
10. Livhanyani tshifanyiso na ipfi lone.



11. Dadzisani nga "ndi thukhu kha", "ndi khulwane kha" kana "i lingana na" uri fhungo mbalo li vhe lone.




158 _____ 158.

12. Tingedzelani leqere la phindulo yone.
Tshifhinga kha watshi ndi ...



- A hafu u bva kha iri ya vhurathi.
- B kotara u bva kha iri ya vhuraru.
- C hufu u bva kha iri ya vhuraru.
- D kotara u bva kha iri ya vhurathi.


13. Lavhelesani zwifanyiso zwi re af'ho f'hasi ni kone u f'hindula mbudziso.

		
ndou	tshugulu	tshimange

Ndi phukha ifhio i no leluwesa? _____.


14. Fhedzisani fhungombalo kha 14.1 na 14.2.

14.1



_____ x _____ = _____

14.2



___ + ___ + ___ + ___ + ___ + ___ + ___ = _____


15. Fhedzisani phetheni dza nomboro kha 15.1 na 15.2.

15.1 _____; _____; _____; 12; 9; 6; 3


15.2 44; 48; 52; 56; _____; _____; _____

16. Fhedzisani nomboro yo salaho.

$$34 + \underline{\quad} = 75$$



17. Hu na zwigwada zwa vhana zwa 12 kilasini. Tshigwada tshiñwe na tshiñwe tshi na vhana vhaṅa. Hu na vhana vhangana ngomu kilasini?

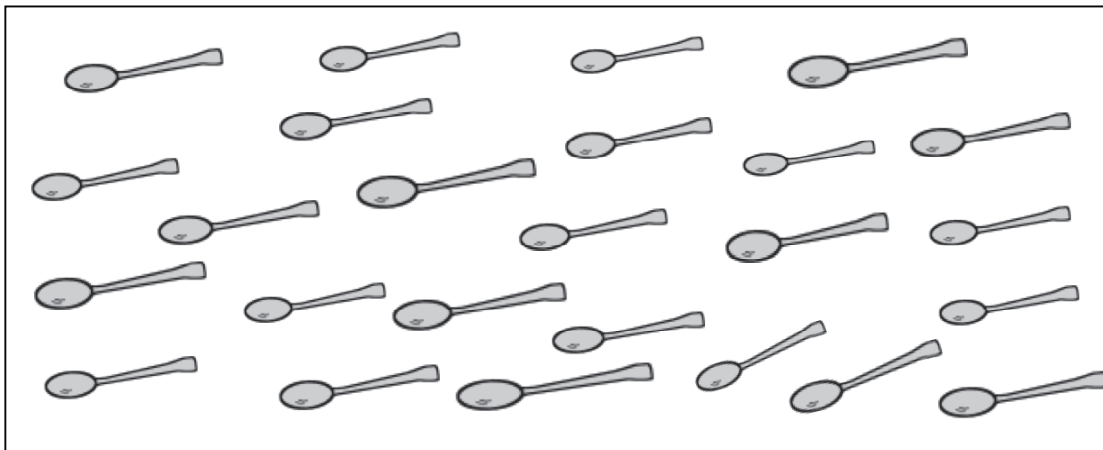


Hu na vhana vha _____ kilasini.

18. Fhedzisani:



	Ndi na	Nda shumisa	Tshintshi
18.1	R35	R15	
18.2		35c	15c

19. Kovhani zwilebula zwa 25 zwo sumbedzwaho kha tshif anyiso kha vhasidzana vhatanu u lingana ni fhedzise fhungo afho fhasi.



Musidzana muñwe na muñwe u wana zwilebula zwa _____.

20. Hu tōḡea khaphu nḡa dzo ḡalaho nga maḡi u ḡadza geḡela. Hu tōḡea khaphu nngana u ḡadza geḡela mbili?



Geḡela mbili dzi ḡo ḡala nga khaphu dza _____.

2l. Shumisani girafu ya zwifanyiso u fhedzisa mafhungo a re afho fhasi.

Rekhodo ya mutsho kha maiwe a maḍuvha nga Fulwana							
Tshivhalo tsha maḍuvhas	8						
	7						
	6						
	5						
	4						
	3						
	2						
	1						
		Makolenyana	Ḍuvha	Maḍumbu	Mvula	Mahaḍa	Muya

2l.1 Ho vha hu na maḍuvha a _____ a mvula nga Fulwana.

2l.2 Maḍuvha a muya a fhira maḍuvha a maḍumbu nga _____.

ṰHANGANYELO: 30

